

*Visit*

**FREETESTPAPER.com**

*for more papers*



Website: [freetestpaper.com](http://www.freetestpaper.com)



[Facebook.com/freetestpaper](https://www.facebook.com/freetestpaper)



[Twitter.com/freetestpaper](https://www.twitter.com/freetestpaper)

**RIVER VALLEY PRIMARY SCHOOL**  
**MINI TEST 3**  
**2017**  
**PRIMARY TWO**  
**MATHEMATICS**

**Instructions to candidates**

- Do not open the booklet until you are instructed to do so.
- Read all instructions provided in each section carefully.
- Show your workings clearly as marks may be awarded.

Name: \_\_\_\_\_ ( )

Class: Primary 2 ( )

Date: 14 August 2017

Duration : 1 hour

**SUMMARY OF MARKS**

Section		Questions	Marks Awarded	Maximum Marks
A	Multiple Choice Questions	1 – 5		10
B	Short Answer Questions	6 – 12		14
C	Long Answer Questions	13 -14		6
<b>Total</b>				<b>30</b>

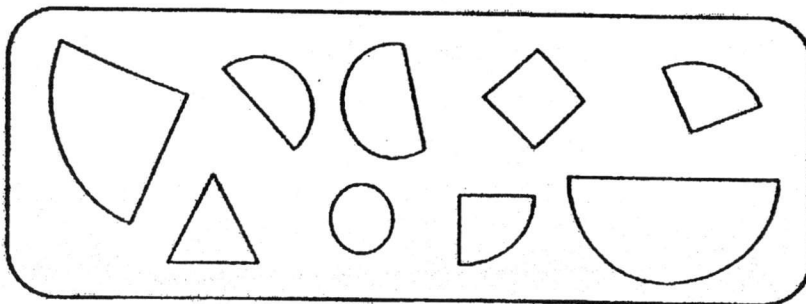
Parent's Signature: \_\_\_\_\_

**Section A: Multiple Choice Questions (10 marks)**

Questions 1 to 5 carry 2 marks each.

Choose the correct answer and write its number (1, 2, 3 or 4) in the brackets provided.

1. How many quarter circles are there?



(1) 6

(2) 5

(3) 3

(4) 4

( )

2. Look at the parcel below.



Parcel

The mass of the parcel is 4 kg.

What is the mass of 8 such parcels?

(1) 12 kg


(2) 2 kg

(3) 32 kg

(4) 4 kg

( )

3. How much money is shown below?



(1) \$6.80

(2) \$7.70

(3) \$8.06


(4) \$8.60

( )

4. Joe bought an ice cream for \$2.

He gave the cashier \$10 and received a \$5 note and some \$1 coins.

How many \$1 coins did he receive?



(1) 5


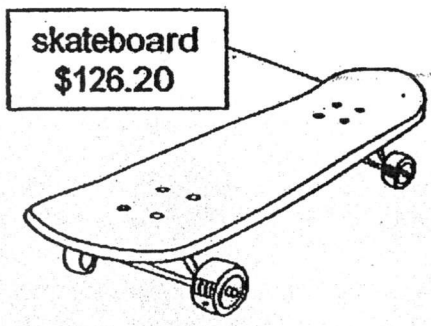
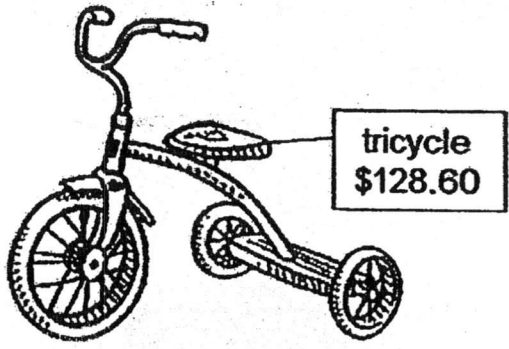
(2) 2

(3) 3

(4) 7

( )

5. Which item costs the least amount of money?



(1) bicycle

(2) scooter

(3) skateboard

(4) tricycle

( )

**Section B: Short Answer Questions (14 marks)**

Questions 6 to 12 carry 2 marks each.

Read the questions carefully and write your answers in the spaces provided.


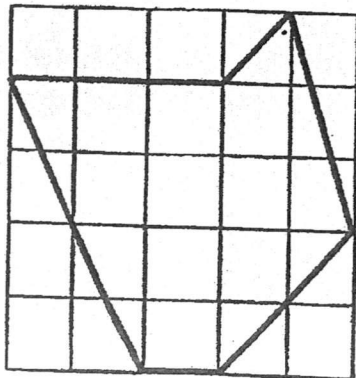
6a. Colour the correct number of coins to show \$3.35.



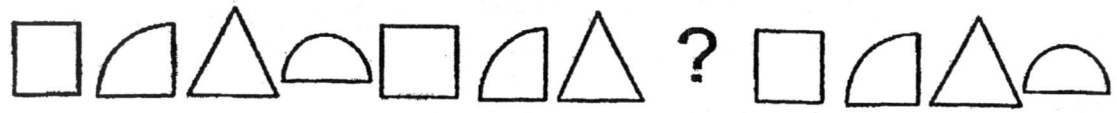
6b.  $895\text{¢} = \$$  \_\_\_\_\_





Answer : \$ \_\_\_\_\_

7a. Copy this figure to the square grid on the right.

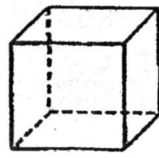
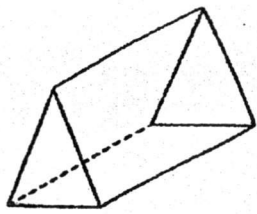




7b) Tick (✓) the correct figure to complete the pattern below.

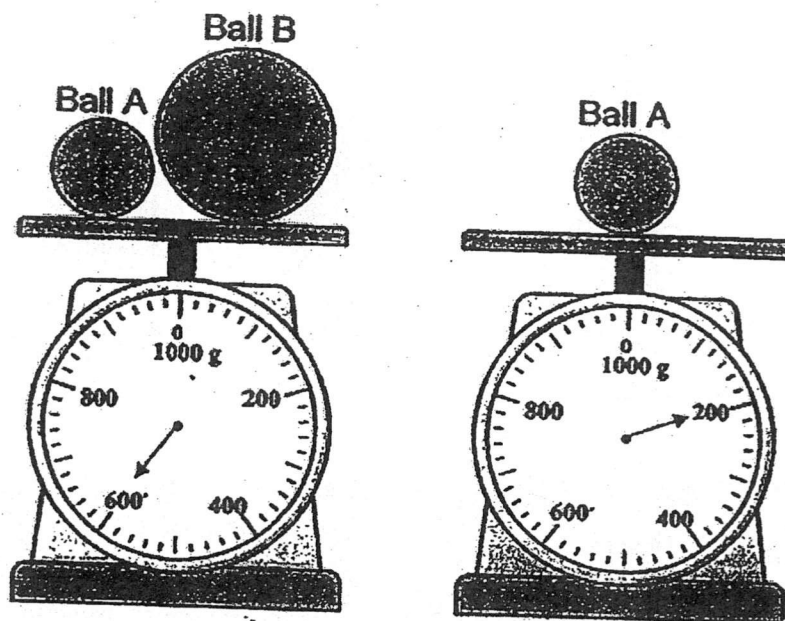


8. Circle the solids that have the same number of flat surfaces.



Study the diagram below and answer questions 9a and 9b.



9a. What is the mass of Ball A?

Answer: \_\_\_\_\_ g

9b. What is the mass of Ball B?

Answer: \_\_\_\_\_ g

Look at the pictures below carefully and answer questions 10a and 10b.



Potato Chips  
\$4



Loaf of Bread  
\$2



Chocolate Bar  
\$3



Bag of Cookies  
\$5

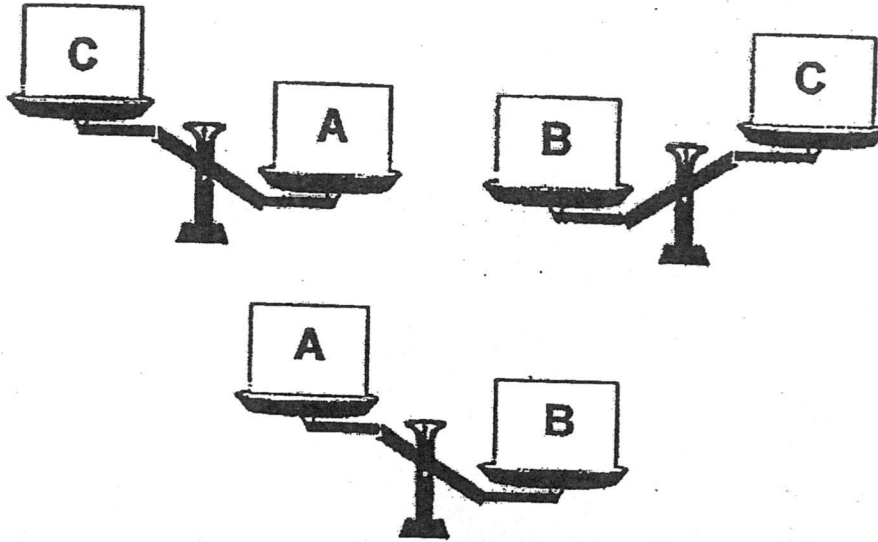
- 10a. Dave bought a packet of potato chips and a bag of cookies.  
He gave the cashier \$10.  
How much change would he receive?

Answer: \$ \_\_\_\_\_

- 10b. Sue bought 2 chocolate bars and a loaf of bread.  
How much did she pay altogether?

Answer: \$ \_\_\_\_\_

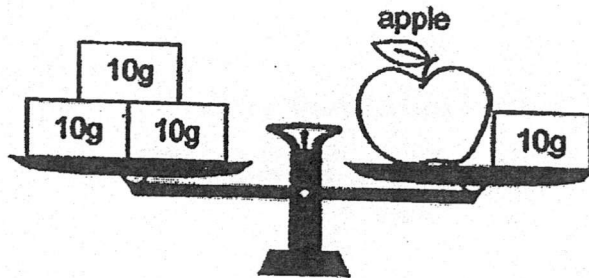
11a. Look at the pictures carefully.



Arrange the boxes, beginning with the lightest.

\_\_\_\_\_ , \_\_\_\_\_ , \_\_\_\_\_

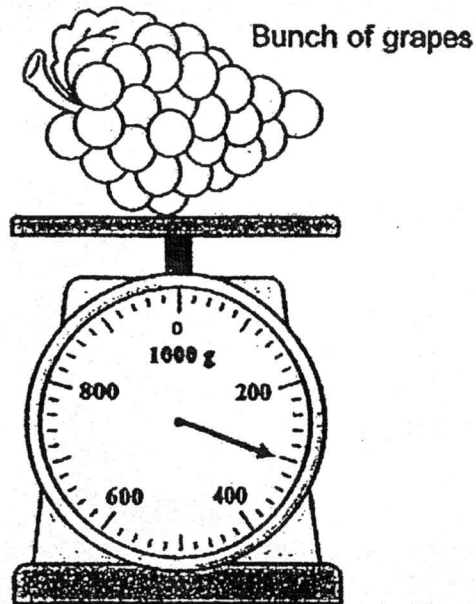
11b. Study the diagram below carefully.



What is the mass of the apple?

Answer: \_\_\_\_\_ g

Study the diagram below and answer questions 12a and 12b.



12a. What is the mass of the bunch of grapes?

Answer: \_\_\_\_\_ g

12b. The bunch of grapes cost \$6.

Mr Ong bought 3 such bunches of grapes.

How much did he have to pay altogether?

Answer: \$ \_\_\_\_\_

**Section C: Long Answer Questions (6 marks)**

Question 13 and 14 carry 3 marks each.

Show your equations and working clearly. Write your answer in the space provided.

13. Mrs Lee had 350 g of flour.

She used 125 g of flour to bake a cake and 95 g of flour to bake some muffins.

How much flour had she left?

She had \_\_\_\_\_ g of flour left.

14. Ali saved \$486.  
He saved \$197 more than Bala.  
Bala saved \$335 less than Caili.  
How much money did Caili save?

Caili saved \$\_\_\_\_\_

*Have you checked your answers?*

~ End of Mini Test 3 ~

# ANSWER SHEET

EXAM PAPER 2017(P2)

SCHOOL : RIVER VALLEY

SUBJECT : MATHEMATICS

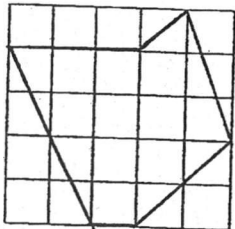
TERM : CA2

Q1	Q2	Q3	Q4	Q5
3	3	4	3	1...

6)a) \$1, \$1, \$1, 20c, 10c, 5c

b) \$8.95

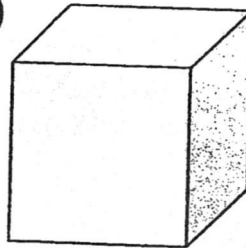
7)a)



b)



8)



9)a) 200g    b) 400g

10)a)  $5 + 4 = 9$

$$10 - 9 = \$1$$

b)  $3 + 3 = 6$

$$6 + 2 = \$8$$

11)a) C, A, B

$$\text{b) } 10 + 10 + 10 = 30$$

$$30 - 10 = 20\text{g}$$

12)a) 300g

$$\text{b) } 3 \times 6 = \$18$$

13)  $350 - 125 = 225$

$$225 - 95 = 130$$

She had 130 g of flour left.

14)  $486 - 197 = 289$

$$289 + 335 = 624$$

Caili saved \$624