

Visit
FREETESTPAPER.com
for more papers



Website: freetestpaper.com



[Facebook.com/freetestpaper](https://www.facebook.com/freetestpaper)



[Twitter.com/freetestpaper](https://www.twitter.com/freetestpaper)

Name: _____ ()

Class: 2.()

Date: _____

Section A

For each question, four options are given. One of them is the correct answer. Make your choice and write its number (1, 2, 3 or 4) in the brackets provided.

1. 2 hundreds and 1 ten = _____.
What is the missing number?

- (1) 12
- (2) 21
- (3) 201
- (4) 210

()

2. In the number 403, the digit 0 is in the _____ place.

- (1) ones
- (2) tens
- (3) hundreds
- (4) thousands

()

3. Study the number pattern below.
What is the missing number in the box?

12 , 15 , 19 , 22 , 26 , , 33 , 36 , 40 , 43

- (1) 27
- (2) 28
- (3) 29
- (4) 30

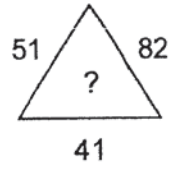
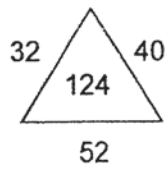
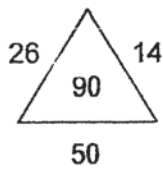
()

4. $400 + \text{ } + 6 = 416$
What is the missing number in the box?

- (1) 1
- (2) 10
- (3) 100
- (4) 1000

()

5. Study the number pattern shown below. What is the missing number?

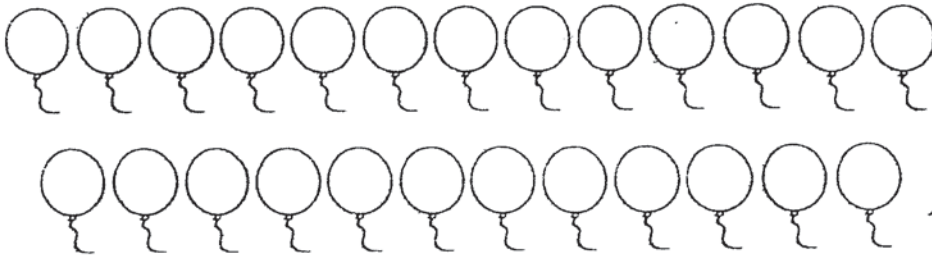


- (1) 92
(2) 123
(3) 133
(4) 174 ()

6. What is the value of 8 groups of 4?

- (1) 12
(2) 16
(3) 32
(4) 48 ()

7. All the balloons below are shared equally among 5 boys.



How many balloons will each boy get?

- (1) 5
(2) 2
(3) 3
(4) 4 ()


8. Which one of the following numbers can be divided by both 2 and 3 completely?

- (1) 9
(2) 15
(3) 18
(4) 20 ()

9. Granny bakes 8 cakes and puts 5 cherries on each cake.
How many cherries does Granny use altogether?

- (1) 13
- (2) 25
- (3) 35
- (4) 40

10. Look at the picture below. Which string is the longest?



- (1) R
- (2) S
- (3) T
- (4) U

()

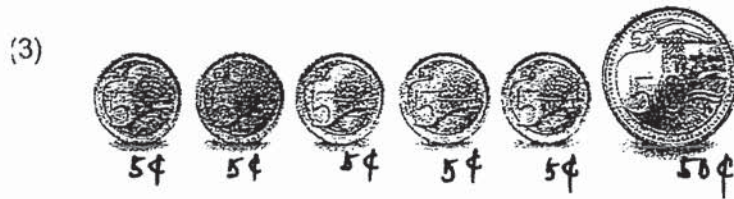

11. May and Tina carried a sack of rice home from the supermarket.
Which one of the following may be the mass of the sack of rice?

- (1) 5 g
- (2) 50 g
- (3) 5 kg
- (4) 500 kg




()

12. Which one of the following is the same as \$0.55?



13. Lily wants to buy the pair of shoes and the toy dog.



Which of the following is not enough for her to pay for the pair of shoes and the toy dog?

- (1) 1 fifty-dollar note
 - (2) 3 ten-dollar notes
 - (3) 7 five-dollar notes
 - (4) 12 two-dollar notes
- ()

14. What is the time shown on the clock face?



- (1) 5.50
- (2) 6.10
- (3) 6.50
- (4) 10.30


()

15. Which one of the figures shows $\frac{1}{4}$ shaded?

(1)



(2)



(3)



(4)



()

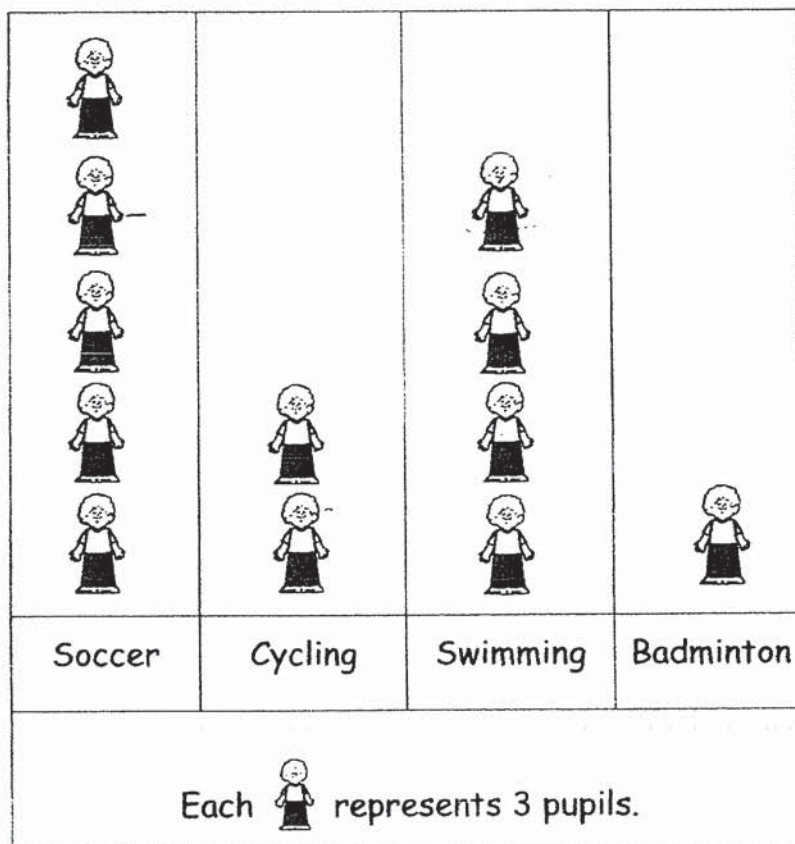
16. A car uses 93 ℓ of petrol. It uses 35 ℓ less petrol than a truck.
How much petrol does a truck use?

- (1) 35
(2) 58
(3) 62
(4) 128

()

Study the graph and answer Question 17.

The picture graph below shows the favourite sports of pupils in Class 2B.



17. How many more pupils like soccer than badminton?

- (1) 12
(2) 9
(3) 3
(4) 4

18. Amelia drew a picture using only curved lines. Which picture did she draw?

(1)



(2)




(3)



(4)



()

19. $3 + 3 + 3 + 3 + 3 + 3 + 3 + 3 + 3 + 3 + 3 =$  $\times 3$

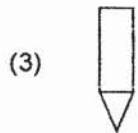

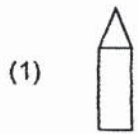
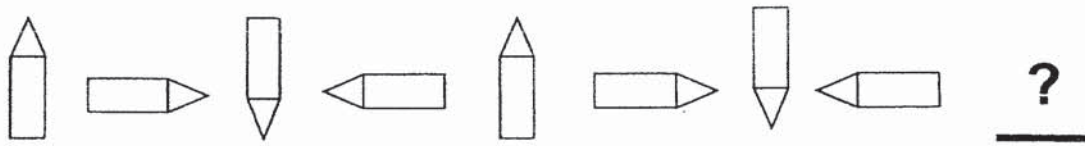
$90 \div$  $=$  $+$ 

What is the value of  ?

- (1) 5
- (2) 8
- (3) 10
- (4) 18

()

20. Study the pattern below. What comes next?



()

21. Which one of the following would be the most likely length of your bed?

- (1) 2 cm
- (2) 2 m
- (3) 20 cm
- (4) 20 m



()

22. $28 \div 4 = \boxed{} \div 10$

The missing number in the box is _____.

- (1) 40
- (2) 50
- (3) 60
- (4) 70

()

Name: _____ ()

Class: 2.()

Date: _____

Section C

For each question, show your working clearly as marks will be given for working and relevant statements.

1. Matthew collected 309 trading cards. He collected 152 more trading cards than Ken.
How many trading cards did Ken collect?

Ken collected _____ trading cards.

2. Mrs Tan bought a pizza and cut it into 9 equal pieces. Her son ate 4 pieces. What fraction of the pizza was left?

_____ of the pizza was left.

3. Bernard had \$890. He spent \$114 on transport and \$378 on food.
- (a) How much did he spend on transport and food altogether?

He spent \$ _____ on transport and food altogether.

- (b) How much had Bernard left?

He had \$ _____ left.

4. James has 320 sweets.
He gives away 5 sweets every day.

(a) How many sweets did he give away after 9 days?


He gave away _____ sweets after 9 days.

(b) How many sweets had James left after 9 days?

He had _____ sweets left after 9 days.

5. Mrs Lee went to watch a movie with her son and her 2 daughters.

(a) How much did the tickets for Mrs Lee's son and 2 daughters cost?



The tickets for the children cost _____.

(b) How much did Mrs Lee pay for all the tickets?

She paid _____ for all the tickets.

6. Mr Tan makes toasted bread for his customers.
Each customer orders 4 slices of toasted bread.

- (a) If Mr Tan has 6 customers, how many slices of toasted bread must he make?

He must make _____ pieces of toasted bread.

- (b) How many customers does Mr Tan have if he has to make 36 slices of toasted bread?

He has _____ customers.

7. Mr Lee had \$600. He bought a watch for \$225 and a pair of shoes for \$178.

(a) How much did he pay for the watch and the pair of shoes?

He paid _____ for the watch and the pair of shoes.

(b) How much money had he left?

He had _____ left.

