

Visit

FREETESTPAPER.com

for more papers



Website: [freetestpaper.com](http://www.freetestpaper.com)



[Facebook.com/freetestpaper](https://www.facebook.com/freetestpaper)



[Twitter.com/freetestpaper](https://www.twitter.com/freetestpaper)

CANDIDATE
NAME

CLASS

INDEX
NUMBER

METHODIST GIRLS' SCHOOL

Founded in 1887



PRELIMINARY EXAMINATION 2020 Secondary 4

Tuesday

ADDITIONAL MATHEMATICS

4047/1

11 August 2020

PAPER 1

2 hours

Candidates answer on the Question Paper.

No Additional Materials are required.

READ THESE INSTRUCTIONS FIRST

Write your class, index number and name in the spaces at the top of this page.

Write in dark blue or black pen.

You may use a HB pencil for any diagrams or graphs.

Do not use staples, paper clips, glue or correction fluid.

Answer **all** questions.

Give non-exact numerical answers correct to 3 significant figure, or 1 decimal place in the case of angles in degrees, unless a different level of accuracy is specified in the question.

The use of an approved scientific calculator is expected, where appropriate.

You are reminded of the need for clear presentation in your answers.

At the end of the examination, fasten all your work securely together.

The number of marks is given in brackets [] at the end of each question or part question.

The total number of marks for this paper is 80.

ALGEBRA*Quadratic Equation*

For the quadratic equation $ax^2 + bx + c = 0$,

$$x = \frac{-b \pm \sqrt{b^2 - 4ac}}{2a}$$

Binomial Expansion

$$(a + b)^n = a^n + \binom{n}{1}a^{n-1}b + \binom{n}{2}a^{n-2}b^2 + \dots + \binom{n}{r}a^{n-r}b^r + \dots + b^n,$$

where n is a positive integer and $\binom{n}{r} = \frac{n!}{r!(n-r)!} = \frac{n(n-1)\dots(n-r+1)}{r!}$.

2. TRIGONOMETRY*Identities*

$$\sin^2 A + \cos^2 A = 1$$

$$\sec^2 A = 1 + \tan^2 A$$

$$\operatorname{cosec}^2 A = 1 + \cot^2 A$$

$$\sin(A \pm B) = \sin A \cos B \pm \cos A \sin B$$

$$\cos(A \pm B) = \cos A \cos B \mp \sin A \sin B$$

$$\tan(A \pm B) = \frac{\tan A \pm \tan B}{1 \mp \tan A \tan B}$$

$$\sin 2A = 2 \sin A \cos A$$

$$\cos 2A = \cos^2 A - \sin^2 A = 2 \cos^2 A - 1 = 1 - 2 \sin^2 A$$

$$\tan 2A = \frac{2 \tan A}{1 - \tan^2 A}$$

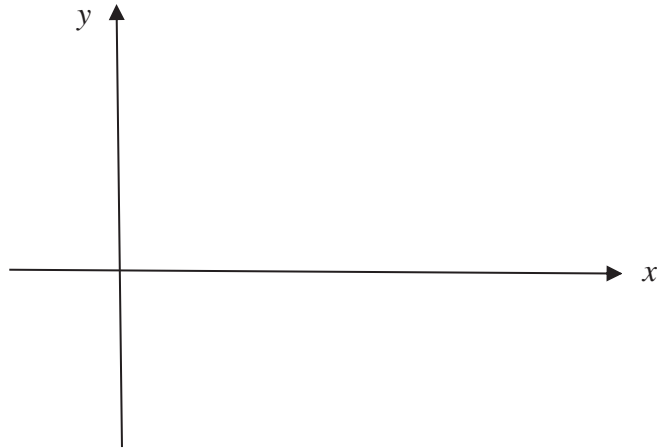
Formulae for ΔABC

$$\frac{a}{\sin A} = \frac{b}{\sin B} = \frac{c}{\sin C}.$$

$$a^2 = b^2 + c^2 - 2bc \cos A.$$

$$\Delta = \frac{1}{2} bc \sin A.$$

1. (i) On the same diagram, sketch the curves $y^2 = 81x$ and $y = \frac{4}{\sqrt{x}}$ for $x > 0$. [2]



- (ii) The parabola $y^2 = 81x$ intersects the curve $y = \frac{4}{\sqrt{x}}$ at the point A.

Find the equation of normal to the curve $y = \frac{4}{\sqrt{x}}$ at A. [5]

2. The equation of a polynomial is given by $g(x) = 2x^3 - x^2 + 8x - 4$.
- (i) Find the remainder when $g(x)$ is divided by $2x$. **[1]**
- (ii) Explain why $g(x) = 0$ has only one real root. **[4]**

2. (iii) Express $\frac{34}{2x^3 - x^2 + 8x - 4}$ in partial fractions. [4]

3. Do not use a calculator in this question.

A cylinder with radius $(2 + \sqrt{3})$ cm has a volume of $\pi(26 + 4\sqrt{48})$ cm³, find the height of the cylinder in the form $m + n\sqrt{3}$, where m and n are integers. **[4]**

4. It is given that $y = \frac{x^2}{2}(3-2x)^5$.

(i) Obtain an expression for $\frac{dy}{dx}$. [2]

(ii) Determine the set of values of x for which y is increasing. [2]

(iii) A point P moves along the curve $y = \frac{x^2}{2}(3-2x)^5$ in such a way that the y -coordinate of P is decreasing at a rate of 0.05 units per second. Find the rate of increase of the x -coordinate of P when $x = 1$. [2]

5. The function f is defined, for $0^\circ \leq x \leq 360^\circ$, by $f(x) = a - b \sin cx$, where a , b and c are positive constants.

(a) Given that the period is 240° and the greatest and the least values of $f(x)$ are 7 and -1 respectively, find the values of a , b and c . [3]

(b) State the amplitude of $f(x)$. [1]

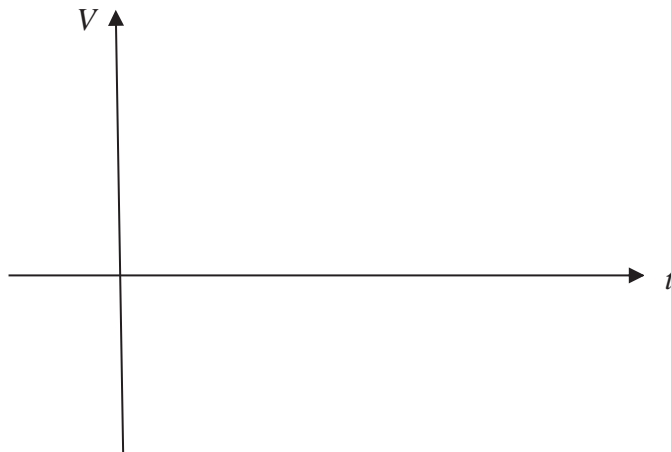
(c) Sketch the graph of $y = a - b \sin cx$. [2]

6. At the beginning of 2020, Mr Lim bought an antique watch for \$ 8000. It was believed that the value of the antique watch will increase continuously with time such that its value increased 10% after every 3 years.

(i) Find the value of the antique watch after 15 years, correct to the nearest dollar. [1]

(ii) Write down an expression for $\$V$, the value of the antique watch, after Mr Lim owned it for t years. [1]

(iii) Sketch the graph of V against t . [1]



(iv) Using your answer in part (ii), find the year that Mr Lim's watch first appreciates to \$50 000. [3]

7. (a) Given that $\int_a^b (\sqrt{3x+2}) dx = 5$, where a and b are positive constants.

(i) Evaluate $\int_b^a (\sqrt{12x+8}) dx$ [2]

(ii) Explain why $\int_a^b (\sqrt{3x+2}) dx$ cannot be found when $a = -1$. [1]

(b) Solve the equation $\frac{\log_2 x}{\log_x 8} = 3$. [4]

8. (a) Without using a calculator, and showing all your working, find the exact value

$$\text{of } \cos \frac{\pi}{4} \cos \frac{5\pi}{12} - \sin \frac{\pi}{4} \sin \frac{5\pi}{12} \quad [2]$$

- (b) Given that θ is reflex and $\cos \theta = p$, where $p > 0$.

Express the following in terms of p .

(i) $\tan \theta$ [2]

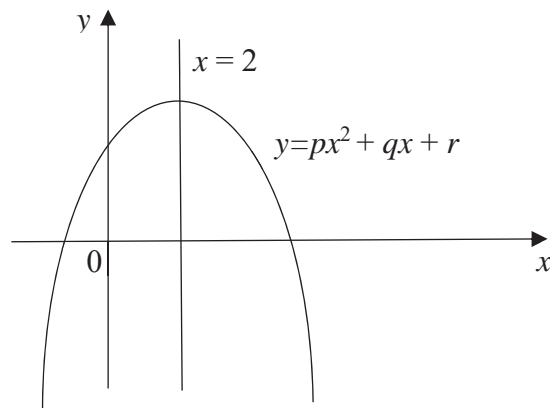
(ii) $\sec\left(\frac{\pi}{2} - \theta\right)$ [2]

9. (i) Write down the general term in the binomial expansion of $\left(2x - \frac{1}{3x^3}\right)^6$. [1]

(ii) Explain, showing your working clearly, if there is a term independent of x in the expansion. [2]

(iii) Using the general term, or otherwise, determine the term independent of x in the binomial expansion of $\left(3x^2 + 1 + \frac{2}{x^2}\right)\left(2x - \frac{1}{3x^3}\right)^6$. [4]

10.



The diagram above shows part of the graph of $y = px^2 + qx + r$.

The equation of line of symmetry of the curve is $x = 2$.

Determine the conditions for each of the following expressions, justifying your answer.

- (i) $q^2 - 4pr$ [2]
- (ii) $\frac{dy}{dx}$ when $x = 2$ [2]
- (iii) q [2]

11. The points $P(-6, 1)$, $Q(4, 5)$ and $R(-3, 8)$ lie on a circle C .

(i) Find the gradient of each of the lines PR and QR .

[1]

(ii) What do your answers to part (i) imply about the line PQ relative to the circle C ?

Show your working clearly.

[2]

(iii) Find the equation of the circle C .

[3]

(iv) Write down the exact coordinates of the lowest point of the circle C . [1]

(v) Find the equation of tangent to the circle C at P . [3]

12. A curve $y = f(x)$ is such that $f''(x) = 24 \sin 4x - 12 \cos 2x$ and has a stationary point $\left(\frac{\pi}{4}, 1\right)$. Show that $f''(x) + 4f(x) = k \sin px + q$, where k , p and q are constants to be determined. **[6]**

End of Paper

CANDIDATE
NAME

CLASS

INDEX
NUMBER

METHODIST GIRLS' SCHOOL

Founded in 1887



PRELIMINARY EXAMINATION 2020 Secondary 4

Thursday

ADDITIONAL MATHEMATICS

4047/02

13 August 2020

PAPER 2

2 hours 30 minutes

Candidates answer on the Question Paper.
No Additional Materials are required.

READ THESE INSTRUCTIONS FIRST

Write your class, index number and name in the spaces at the top of this page.

Write in dark blue or black pen

You may use a HB pencil for any diagrams or graphs.

Do not use staples, paper clips, glue or correction fluid.

Answer **all** questions.

Give non-exact numerical answers correct to 3 significant figure, or 1 decimal place in the case of angles in degrees, unless a different level of accuracy is specified in the question.

The use of an approved scientific calculator is expected, where appropriate.

You are reminded of the need for clear presentation in your answers.

At the end of the examination, fasten all your work securely together.

The number of marks is given in brackets [] at the end of each question or part question.

The total number of marks for this paper is 100.

1. ALGEBRA**Quadratic Equation**

For the quadratic equation $ax^2 + bx + c = 0$,

$$x = \frac{-b \pm \sqrt{b^2 - 4ac}}{2a}$$

Binomial Expansion

$$(a + b)^n = a^n + \binom{n}{1}a^{n-1}b + \binom{n}{2}a^{n-2}b^2 + \dots + \binom{n}{r}a^{n-r}b^r + \dots + b^n,$$

where n is a positive integer and $\binom{n}{r} = \frac{n!}{r!(n-r)!} = \frac{n(n-1)\dots(n-r+1)}{r!}$.

2. TRIGONOMETRY*Identities*

$$\sin^2 A + \cos^2 A = 1$$

$$\sec^2 A = 1 + \tan^2 A$$

$$\operatorname{cosec}^2 A = 1 + \cot^2 A$$

$$\sin(A \pm B) = \sin A \cos B \pm \cos A \sin B$$

$$\cos(A \pm B) = \cos A \cos B \mp \sin A \sin B$$

$$\tan(A \pm B) = \frac{\tan A \pm \tan B}{1 \mp \tan A \tan B}$$

$$\sin 2A = 2 \sin A \cos A$$

$$\cos 2A = \cos^2 A - \sin^2 A = 2 \cos^2 A - 1 = 1 - 2 \sin^2 A$$

$$\tan 2A = \frac{2 \tan A}{1 - \tan^2 A}$$

Formulae for ΔABC

$$\frac{a}{\sin A} = \frac{b}{\sin B} = \frac{c}{\sin C}$$

$$a^2 = b^2 + c^2 - 2bc \cos A$$

$$\Delta = \frac{1}{2} bc \sin A$$

- 1 Find the largest integer value of k for which the line $y = 1 - x$ does not intersect the curve $y = x^2 + (k + 2)x + 1 - k$. [4]

- 2 Given that the roots of $3x^2 + 2x = 7$ are α and β , find the quadratic equation whose roots are $\alpha + \frac{2}{\alpha}$ and $\beta + \frac{2}{\beta}$. [5]

3 (a) Sketch the graph of $y = |x^2 - 6x + 5|$ for $0 \leq x \leq 7$. [3]

(b) Solve the equation $|x^2 - 6x + 5| = 4$. [3]

4 (a) (i) Prove the identity $\frac{\sec A - \operatorname{cosec} A}{\cot A + \tan A} \equiv \sin A - \cos A$. [3]

(ii) Hence find all the angles between 0° and 180° which satisfy the equation $\left(\frac{2\sec A - 2\operatorname{cosec} A}{\cot A + \tan A}\right)^2 = 1$. [3]

(b) Find all the angles between 0 and 4π which satisfy $3\sec^2 y + 5\tan y = 5$. [4]

5 (a) (i) Find $\frac{d}{dx}(xe^{3-2x})$. [2]

(ii) Hence find $\int 4xe^{3-2x} dx$. [3]

- (b) The equation of a curve is $y = \frac{\ln x}{(3x+1)^2}$. Find the equation of tangent to the curve at $x = 1$. [4]

- (c) A curve is such that $\frac{dy}{dx} = \frac{2}{3x+1} + \frac{3}{\sqrt{3x+1}}$. The curve passes through the point $(0, 3)$, find the equation of the curve. [4]

- 6 (a) Using the substitution $u = 5^x$, solve the equation $5^{x+2} - 25^{x+0.5} = 2(5^{x+1})$, giving your answer correct to 2 decimal places. [4]

- (b) Solve the simultaneous equations: [4]

$$\log_4(2x + y) = \frac{1}{2} - \log_4 3$$

$$(3\sqrt{3})^x = 27(\sqrt{3})^y$$


- 7 The table shows experimental values of two variables, x and y , which are connected by an equation of the form, $e^y = ax^b$, where a and b are constants.

x	2	3	5	7	10
y	2.28	2.94	3.69	4.30	4.88

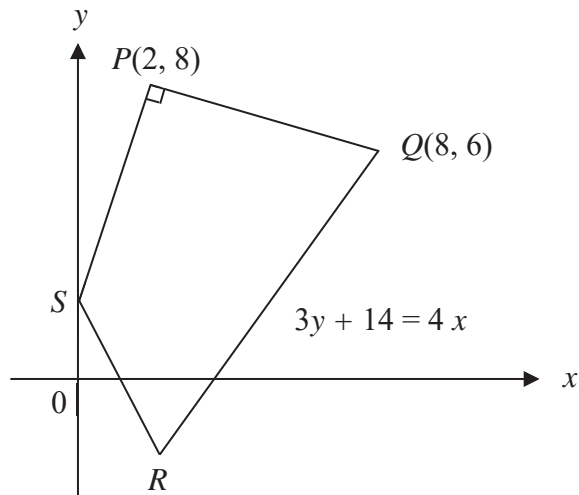
- (i) Plot y against $\ln x$ for the given data and draw a straight line graph. [3]

- (ii) Use your graph to estimate the value of a and of b . [4]

- (iii) Use your graph to estimate the value of x when $e^y = x^5$. [2]



8 Solutions to this question by accurate drawing will not be accepted.



The diagram shows a quadrilateral $PQRS$ in which the point P is $(2, 8)$ and the point Q is $(8, 6)$. The point R lies on the perpendicular bisector of PQ and the point S lies on the y -axis. The equation of QR is $3y + 14 = 4x$ and angle $SPQ = 90^\circ$. Find

(i) the coordinates of S , [3]

(ii) the equation of the perpendicular bisector of PQ , [2]

(iii) the coordinates of R.

[3]

(iv) the area of $PQRS$.

[2]

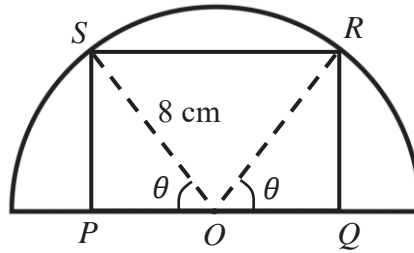
9 A particle moves in a straight line so that its velocity, v m/s, is given by $v = 2t^2 - 8t + 6$, where t is the time in seconds after the start of motion. At $t = 2$, the displacement of the particle from a fixed point O is 1 m. Find

(i) the times when the particle is instantaneously at rest, [2]

(ii) the minimum velocity of the particle and explain the significance of the answer obtained, [3]

(iii) the average speed travelled by the particle in the first 5 seconds. [4]

10



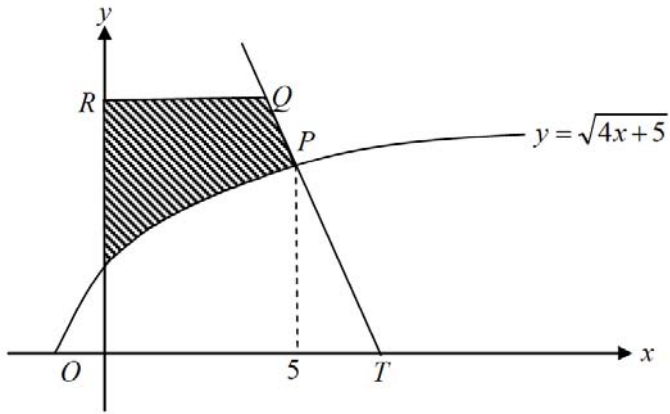
The diagram shows a metal wire, $PQRS$, placed on top of a semicircle metal sheet, with centre O and radius 8 cm. $\angle POS = \angle QOR = \theta$ radians.

- (a) Show that the length of the metal wire $PQRS$, L cm, is given by $L = 16 \sin \theta + 32 \cos \theta$. [2]

- (b) Find the value of θ for which L is stationary. [3]

- (c) Hence, find the maximum value of L . [2]

11



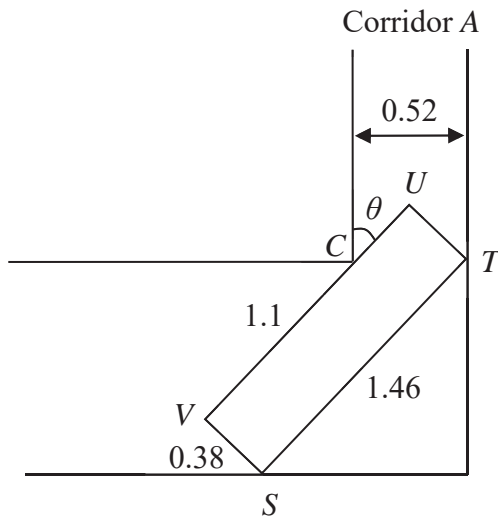
The diagram shows part of the curve $y = \sqrt{4x+5}$, which intersects with the line $x = 5$ at the point P . The normal to the curve at P meets the x -axis at the point T . RQ is parallel to the x -axis and $PT : PQ = 2 : 1$. Find

(a) the coordinates of P and of Q , [5]

(b) the area of the shaded region.

[3]

12



The diagram shows two straight corridors meeting at right angles. Corridor A has a width of 0.52 m. $STUV$ is a rectangular block of length 1.46 m and breadth 0.38 m. The block touches the walls of the corridor at S and T , and also touches the inner corner of the corridor at C , where $VC = 1.1$ m. The angle between CU and the wall at C is θ , where $0^\circ < \theta < 90^\circ$.

(i) Show that $19 \cos \theta + 18 \sin \theta = 26$. [3]

(ii) Express $19 \cos \theta + 18 \sin \theta$ in the form $R \cos(\theta - \alpha)$, where $R > 0$ and $0^\circ < \alpha < 90^\circ$. [3]

(iii) Hence, find the values of θ . [3]

(iv) State the largest value of $19\cos \theta + 18\sin \theta$ and its corresponding value of θ . [2]

~ END OF PAPER ~

