

Visit

FREETESTPAPER.com

for more papers



Website: freetestpaper.com



[Facebook.com/freetestpaper](https://www.facebook.com/freetestpaper)



[Twitter.com/freetestpaper](https://www.twitter.com/freetestpaper)



Bukit Batok Secondary School
PRELIMINARY EXAMINATION 2018
SEC 4 EXPRESS

CHEMISTRY

Paper 1 Multiple Choice

6092/01
24 August 2018
0745 - 0845
1 hour

Additional Materials: Multiple Choice Answer Sheet

READ THESE INSTRUCTIONS FIRST

Write in soft pencil.

Do not use staples, paper clips, glue or correction fluid.

Write your name, index number and class on the Answer Sheet in the spaces provided.

There are **forty** questions on this paper. Answer **all** questions. For each question there are four possible answers **A, B, C** and **D**.

Choose the **one** you consider correct and record your choice in **soft pencil** on the separate Answer Sheet.

Read the instructions on the Answer Sheet very carefully.

Each correct answer will score one mark. A mark will not be deducted for a wrong answer.

Any rough working should be done in this booklet.

A copy of the Periodic Table is printed at the end of the question paper.

The use of an approved scientific calculator is expected, where appropriate.

This document consists of 15 printed pages.

- 1 The reaction scheme shows how hydrated copper(II) sulfate, $\text{CuSO}_4 \cdot 5\text{H}_2\text{O}$, changes when heated.



A little water was accidentally spilled into a dish containing hydrated copper(II) sulfate. What could be done to remove the water, leaving pure, dry $\text{CuSO}_4 \cdot 5\text{H}_2\text{O}$?

- A** Heat the dish over a boiling water-bath.
B Heat the dish to a constant mass.
C Heat the dish with a Bunsen burner.
D Let the dish stand in direct sunlight.
- 2 Aluminium sulfate is sometimes used in water treatment to remove impurities. Aqueous aluminium sulfate is acidic. The table shows the results of tests on four different samples of treated water.
 To which sample had an excess of aluminium sulfate been added?

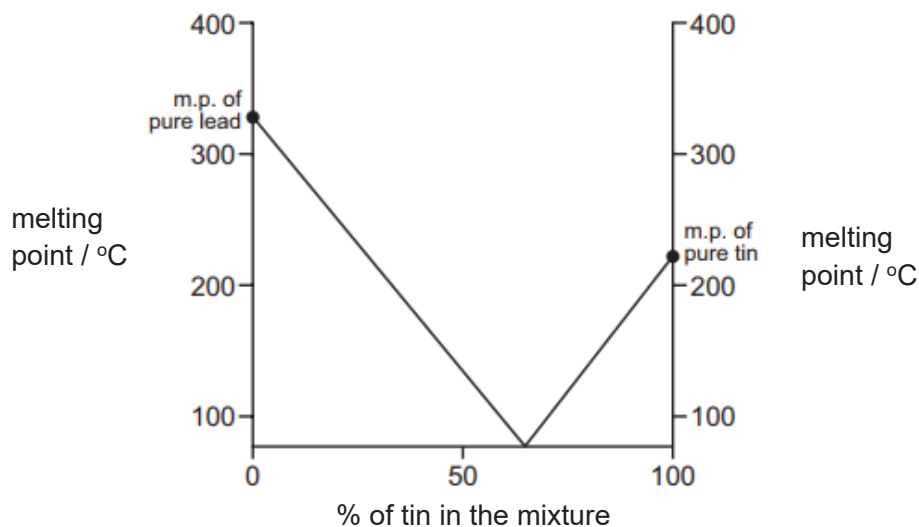
sample	pH of sample	reaction with an excess of aqueous ammonia
A	3	white precipitate
B	3	no reaction
C	7	no reaction
D	11	white precipitate

- 3 An acid, X, was added to a solution of the nitrate of a metal, Y. A dense white precipitate was formed.
 What are X and Y?

	acid X	metal Y
A	hydrochloric	calcium
B	nitric	zinc
C	sulfuric	aluminium
D	sulfuric	barium

- 4 A student tested a solution by adding aqueous sodium hydroxide. A precipitate was not seen because the reagent was added too quickly.
 What could **not** have been present in the solution?
A Al^{3+} **B** Ca^{2+} **C** NH_4^+ **D** Zn^{2+}

- 5 The graph gives the melting points (m.p.) of mixtures of lead and tin.



The graph shows that any mixture of lead and tin must have a melting point that is

- A above that of tin.
 B below that of lead.
 C below that of both tin and lead.
 D between that of tin and lead.
- 6 The isotopes of carbon and oxygen are given in the table.

Isotopes of carbon	^{12}C	^{13}C	^{14}C
Isotopes of oxygen	^{16}O	^{17}O	^{18}O

A molecule of carbon dioxide with molecular mass 46 could contain

- A one ^{12}C atom and two ^{16}O atoms.
 B one ^{14}C atom and two ^{18}O atoms.
 C one ^{12}C atom, one ^{16}O atom and one ^{18}O atom.
 D one ^{14}C atom, one ^{16}O atom and one ^{18}O atom.
- 7 Particles with the same electron arrangement are said to be isoelectronic. Which of the following compounds contains ions which are isoelectronic?
- A CaCl_2
 B KBr
 C MgCl_2
 D Na_2S

8 The table shows information about particles X and Y.

	number of protons	number of neutrons	electronic structure
X	9	10	2, 8
Y	17	20	2, 8, 8

Which statement is correct for both X and Y?

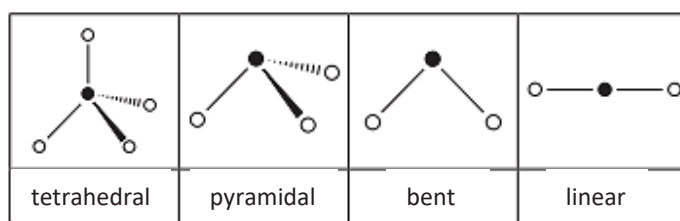
- A They are atoms of metals.
- B They are atoms of noble gases.
- C They are isotopes of the same element.
- D They are negative ions.

9 The table shows some properties of four substances.

Which substance is an ionic compound?

	melting point /°C	conducts electricity when solid	dissolves in water	conducts electricity in aqueous solution
A	-102	no	yes	yes
B	801	no	yes	yes
C	842	yes	yes	yes
D	3000	yes	no	no

10 The shapes and names of some molecules are shown below.



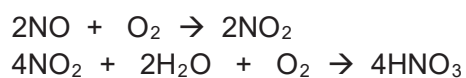
Phosphine is a compound of phosphorus, an element in Group V, and hydrogen. The shape of a molecule of phosphine is likely to be

- A bent.
- B linear.
- C pyramidal.
- D tetrahedral.

- 11 Which sulfide contains the greatest mass of sulfur in a 10 g sample?

sulfide	formula	mass of one mole /g
A	NiS	91
B	FeS ₂	120
C	MoS ₂	160
D	PbS	239

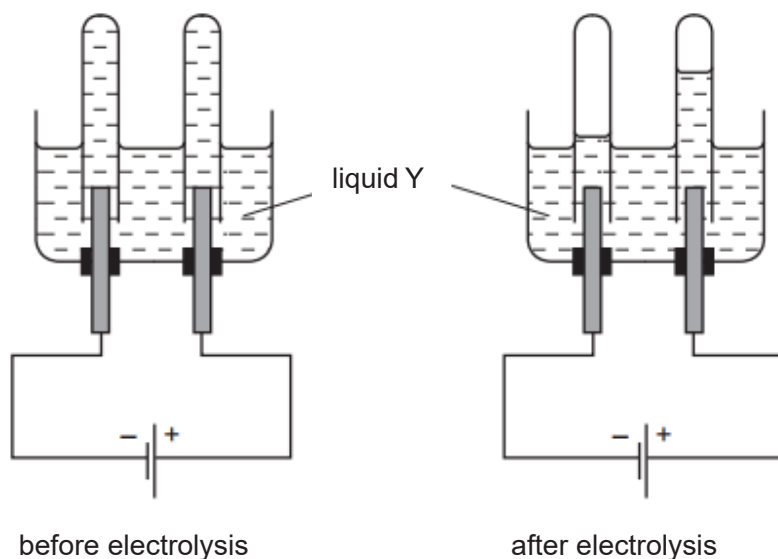
- 12 Two of the reactions used in the manufacture of nitric acid, HNO₃, are shown.



What is the maximum number of moles of nitric acid which could be formed from one mole of nitrogen monoxide, NO?

- A** 0.5 **B** 1.0 **C** 2.0 **D** 4.0
- 13 A piece of chalk has a mass of 23.0 g. Chalk is impure calcium carbonate. When analysed, the chalk is found to contain 0.226 moles of calcium carbonate. What is the percentage purity of the piece of chalk?
- A** 0.983% **B** 1.02% **C** 77.0% **D** 98.3%
- 14 Which element requires the smallest number of electrons for one mole of atoms to be liberated during electrolysis?
- A** aluminium
B calcium
C copper
D sodium

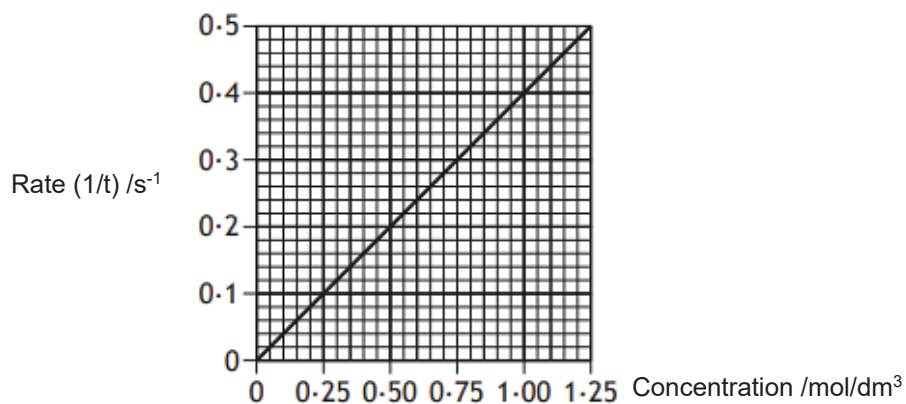
- 15 The diagrams show an electrolysis experiment using inert electrodes.



Which could be liquid Y?

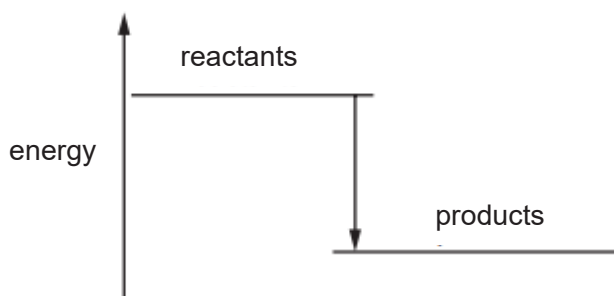
- 1 aqueous copper(II) sulfate
 - 2 aqueous sodium nitrate
 - 3 concentrated aqueous sodium chloride
 - 4 dilute sulfuric acid
- A** 4 only
B 1 and 4 only
C 2 and 4 only
D 2, 3 and 4 only
- 16 A student carries out a single experiment to determine the speed of reaction between calcium carbonate and an excess of hydrochloric acid.
 Which of the following does **not** change during the course of the reaction?
- A** concentration of the hydrochloric acid solution
 - B** mass of the calcium carbonate
 - C** volume of carbon dioxide evolved
 - D** volume of hydrochloric acid solution

- 17 The graph shows how the rate of a reaction varies with the concentration of one of the reactants.



What is the reaction time, in seconds, when the concentration of the reactant was 0.50 mol/dm³?

- A 0.2 B 0.5 C 2.0 D 5.0
- 18 A diagram for the energy change during a chemical reaction is shown.



For which reaction(s) would this be an appropriate diagram?

- 1 $\text{CH}_4 + 2\text{O}_2 \rightarrow \text{CO}_2 + 2\text{H}_2\text{O}$
- 2 $\text{C}_6\text{H}_{12}\text{O}_6 + 6\text{O}_2 \rightarrow 6\text{CO}_2 + 6\text{H}_2\text{O}$
- 3 $2\text{C} + \text{O}_2 \rightarrow 2\text{CO}$

- A 1 only
 B 1 and 2 only
 C 1 and 3 only
 D 1, 2 and 3

19 The oxide of titanium, TiO_2 , is used as a 'whitener' in toothpaste. It is obtained from the ore iron(II) titanate, FeTiO_3 . What is the change, if any, in the oxidation number of titanium in the reaction $\text{FeTiO}_3 \rightarrow \text{TiO}_2$?

- A It is oxidized from +3 to +4.
- B It is reduced from +3 to +2.
- C It is reduced from +6 to +4.
- D There is no change in the oxidation number.

20 The pH of an aqueous solution of hydrochloric acid is 2. What will be the pH of the acid after the addition of 10.0 g of sodium chloride?

- A 2 B 5 C 7 D 9

21 Which row in the table correctly shows the properties of 0.100 mol/dm^3 hydrochloric acid when compared with 0.100 mol/dm^3 ethanoic acid?

	pH	conductivity	Rate of reaction with magnesium
A	lower	lower	slower
B	higher	higher	faster
C	lower	higher	faster
D	higher	lower	slower

22 Consider the three reactions below.

- reaction between nitric acid and calcium hydroxide
- ethane burning in air
- reaction between ethanoic acid and ethanol

A student made three statements about the three reactions above.

- 1 carbon dioxide is produced in all reactions
- 2 water is produced in all reactions
- 3 a salt is produced in all reactions

Which statement(s) is/are true?

- A 2 only
- B 1 and 2 only
- C 2 and 3 only
- D 1, 2 and 3

- 23** Methylamine, CH_3NH_2 , has very similar chemical properties to ammonia, NH_3 . Methylamine reacts with hydrogen chloride to form a white crystalline salt, methylammonium chloride.



A sample of methylammonium chloride is heated with aqueous sodium hydroxide. What are the products?

- A** ammonia, sodium chloride and water
B ammonia, sodium hydrogencarbonate and sodium chloride
C methylamine, hydrogen chloride and water
D methylamine, sodium chloride and water

- 24** A student has five reagents.

- dilute hydrochloric acid
- dilute sulfuric acid
- dilute nitric acid
- solid calcium carbonate
- solid copper(II) carbonate

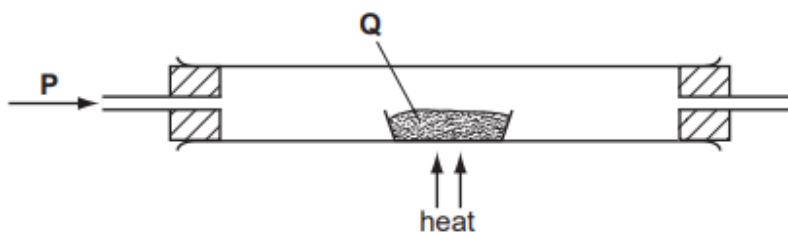
How many soluble salts can be prepared?

- A** 3 **B** 4 **C** 5 **D** 6
- 25** How can a pure sample of barium sulfate be obtained from barium carbonate?
- A** Dissolve it in dilute hydrochloric acid, add dilute sulfuric acid, filter and crystallise.
B Dissolve it in dilute hydrochloric acid, add dilute sulfuric acid, filter and wash.
C Dissolve it in water, add dilute sulfuric acid, filter and crystallise.
D Dissolve it in water, add dilute sulfuric acid, filter and wash.

- 26** An alloy of copper and zinc is added to an excess of dilute hydrochloric acid. The resulting mixture is then filtered. Which observations are correct?

	filtrate	residue
A	colourless solution	none
B	colourless solution	pinkish brown
C	blue solution	grey
D	blue solution	none

- 27 In the apparatus shown, gas P is passed over solid Q.



No reaction occurs if P and Q are

	P	Q
A	hydrogen	lead(II) oxide
B	hydrogen	magnesium oxide
C	oxygen	carbon
D	oxygen	sulfur

- 28 The period 4 elements gallium (Ga), germanium (Ge), arsenic (As) and selenium (Se) are elements below aluminium, silicon, phosphorus and sulfur in the Periodic Table, a portion of which is shown below.

period 3 elements	Al	Si	P	S
period 4 elements	Ga	Ge	As	Se

The properties of each period 4 element resemble those of the period 3 element directly above it.

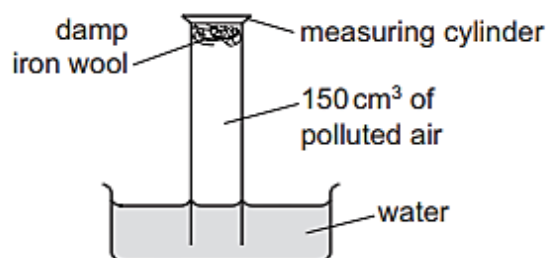
Which period 4 elements form oxides that dissolve in water to give an acid solution?

- A** As and Se
B Ga and Ge
C Ga and Se
D Se only
- 29 When a mineral was heated in a Bunsen flame to a constant mass, a colourless gas that produced a white precipitate in limewater, was given off. The remaining solid was cooled and then added to aqueous hydrochloric acid. Vigorous effervescence was seen. What was the mineral?
- A** aragonite, CaCO_3
B artinite, $\text{MgCO}_3 \cdot \text{Mg}(\text{OH})_2 \cdot 3\text{H}_2\text{O}$
C barytocalcite, $\text{BaCO}_3 \cdot \text{CaCO}_3$
D dolomite, $\text{CaCO}_3 \cdot \text{MgCO}_3$

- 30** Listed below are four solutions.
- 1 aqueous sodium hydroxide
 - 2 aqueous silver nitrate
 - 3 aqueous potassium sulfate
 - 4 dilute hydrochloric acid

Which of the following solution(s) will react with magnesium metal?

- A** 4 only
B 1 and 4
C 2 and 4 only
D 2, 3 and 4 only
- 31** Attaching pieces of magnesium to underground iron pipes can protect the iron from corrosion.
 Which reaction protects the iron from corrosion?
- A** $\text{Fe}^{2+}(\text{aq}) \rightarrow \text{Fe}^{3+}(\text{aq}) + \text{e}$
B $\text{Fe}(\text{s}) \rightarrow \text{Fe}^{2+}(\text{aq}) + 2\text{e}$
C $\text{Mg}^{2+}(\text{aq}) + 2\text{e} \rightarrow \text{Mg}(\text{s})$
D $\text{Mg}(\text{s}) \rightarrow \text{Mg}^{2+}(\text{aq}) + 2\text{e}$
- 32** An experiment to find the percentage of oxygen in 150 cm^3 of polluted air is shown.



The apparatus is left for one week.

After this time, the volume of gas in the measuring cylinder is 122 cm^3 .

What is the percentage of oxygen, to the nearest whole number, in the polluted air?

- A** 19 % **B** 21% **C** 28 % **D** 81%
- 33** The depletion of the ozone layer in the upper atmosphere reduces the Earth's natural protection from harmful ultraviolet radiation.
 Which compound would cause the most depletion of the ozone layer?
- A** CCl_3F **B** CF_4 **C** CHClF_2 **D** CH_2F_2

- 34 The compound, C_8H_{18} undergoes the following process.



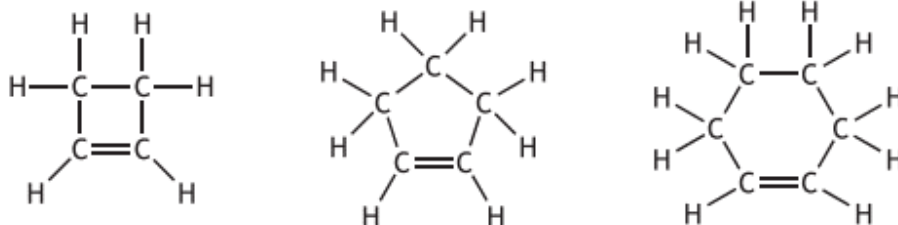
Which row in the table correctly identifies Process X and Compound Y?

	Process X	Compound Y
A	cracking	hexane
B	cracking	hexene
C	distillation	hexane
D	distillation	hexene

- 35 How many moles of hydrogen chloride are formed when one mole of methane is added to a large excess of chlorine in the dark?

A 0 **B** 1 **C** 2 **D** 4

- 36 Three members of the cycloalkene homologous series are shown:



Which of the following is the general formula for this homologous series?

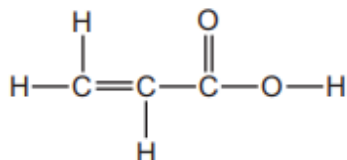
- A** C_nH_{2n-4}
B C_nH_{2n-2}
C C_nH_{2n}
D C_nH_{2n+2}

- 37** Oil contains carbon-carbon double bonds which can undergo addition reactions with iodine. The iodine number of an oil is the mass of iodine in grams that will react with 100 g of oil.

Which row in the table shows the oil that is likely to have the lowest melting point?

	oil	iodine number
A	corn	123
B	linseed	179
C	olive	81
D	soya	130

- 38** A compound has the following structure.



Which reaction(s) will occur with this compound?

- 1 Bromine water will decolourise.
- 2 It will react with an alcohol to form an ester.
- 3 It will react with sodium metal.

- A** 1 only
B 1 and 2 only
C 2 and 3 only
D 1, 2 and 3

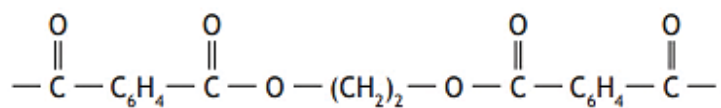
- 39** Polyvinyl chloride (PVC) is a man-made polymer used mainly in the manufacture of pipes. PVC pipes are strong, lightweight and does not rot.

Which statements correctly describe the polymer, polyvinyl chloride, PVC?

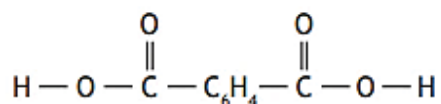
- 1 Combustion of PVC waste produces a highly acidic gas.
- 2 PVC molecules are saturated.
- 3 The empirical formula of PVC is the same as the empirical formula of its monomers.

- A** 1 and 2 only
B 1 and 3 only
C 2 and 3 only
D 1, 2 and 3

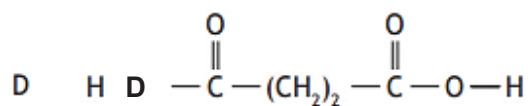
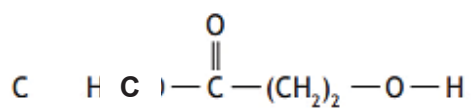
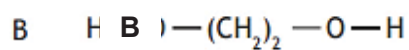
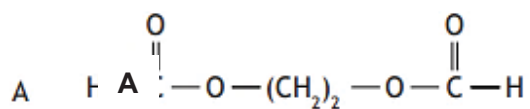
40. A section of a condensation polymer is shown below.



One of the monomers is



The structural formula of the other monomer is



End of paper

The Periodic Table of Elements

Group										
I	II	III	IV	V	VI	VII	0			
3 Li lithium 7	4 Be beryllium 9	5 B boron 11	6 C carbon 12	7 N nitrogen 14	8 O oxygen 16	9 F fluorine 19	10 Ne neon 20			
11 Na sodium 23	12 Mg magnesium 24	13 Al aluminium 27	14 Si silicon 28	15 P phosphorus 31	16 S sulfur 32	17 Cl chlorine 35.5	18 Ar argon 40			
19 K potassium 39	20 Ca calcium 40	21 Sc scandium 45	22 Ti titanium 48	23 V vanadium 51	24 Cr chromium 52	25 Mn manganese 55	26 Fe iron 56			
37 Rb rubidium 85	38 Sr strontium 88	39 Y yttrium 89	40 Zr zirconium 91	41 Nb niobium 93	42 Mo molybdenum 96	43 Tc technetium -	44 Ru ruthenium 101			
55 Cs caesium 133	56 Ba barium 137	57-71 lanthanoids	72 Hf hafnium 178	73 Ta tantalum 181	74 W tungsten 184	75 Re rhenium 186	76 Os osmium 190			
87 Fr francium -	88 Ra radium -	89-103 actinoids	104 Rf Rutherfordium -	105 Db dubnium -	106 Sg seaborgium -	107 Bh bohrium -	108 Hs hassium -			
			109 Mt meitnerium -	110 Ds darmstadtium -	111 Rg roentgenium -	112 Cn copernicium -	113 Nh nihonium -			
			114 Fl flerovium -	115 Mc moscovium -	116 Lv livermorium -	117 Ts tennessine -	118 Og oganeson -			
				119 Uue unbinilium -	120 Uub unbinilium -	121 Uut unbinilium -	122 Uuq unbinilium -			
				123 Uuq unbinilium -	124 Uuq unbinilium -	125 Uuq unbinilium -	126 Uuq unbinilium -			
				127 Uuq unbinilium -	128 Uuq unbinilium -	129 Uuq unbinilium -	130 Uuq unbinilium -			
				131 Uuq unbinilium -	132 Uuq unbinilium -	133 Uuq unbinilium -	134 Uuq unbinilium -			
				135 Uuq unbinilium -	136 Uuq unbinilium -	137 Uuq unbinilium -	138 Uuq unbinilium -			
				139 Uuq unbinilium -	140 Uuq unbinilium -	141 Uuq unbinilium -	142 Uuq unbinilium -			
				143 Uuq unbinilium -	144 Uuq unbinilium -	145 Uuq unbinilium -	146 Uuq unbinilium -			
				147 Uuq unbinilium -	148 Uuq unbinilium -	149 Uuq unbinilium -	150 Uuq unbinilium -			
				151 Uuq unbinilium -	152 Uuq unbinilium -	153 Uuq unbinilium -	154 Uuq unbinilium -			
				155 Uuq unbinilium -	156 Uuq unbinilium -	157 Uuq unbinilium -	158 Uuq unbinilium -			
				159 Uuq unbinilium -	160 Uuq unbinilium -	161 Uuq unbinilium -	162 Uuq unbinilium -			
				163 Uuq unbinilium -	164 Uuq unbinilium -	165 Uuq unbinilium -	166 Uuq unbinilium -			
				167 Uuq unbinilium -	168 Uuq unbinilium -	169 Uuq unbinilium -	170 Uuq unbinilium -			
				171 Uuq unbinilium -	172 Uuq unbinilium -	173 Uuq unbinilium -	174 Uuq unbinilium -			
				175 Uuq unbinilium -	176 Uuq unbinilium -	177 Uuq unbinilium -	178 Uuq unbinilium -			
				179 Uuq unbinilium -	180 Uuq unbinilium -	181 Uuq unbinilium -	182 Uuq unbinilium -			
				183 Uuq unbinilium -	184 Uuq unbinilium -	185 Uuq unbinilium -	186 Uuq unbinilium -			
				187 Uuq unbinilium -	188 Uuq unbinilium -	189 Uuq unbinilium -	190 Uuq unbinilium -			
				191 Uuq unbinilium -	192 Uuq unbinilium -	193 Uuq unbinilium -	194 Uuq unbinilium -			
				195 Uuq unbinilium -	196 Uuq unbinilium -	197 Uuq unbinilium -	198 Uuq unbinilium -			
				199 Uuq unbinilium -	200 Uuq unbinilium -	201 Uuq unbinilium -	202 Uuq unbinilium -			
				203 Uuq unbinilium -	204 Uuq unbinilium -	205 Uuq unbinilium -	206 Uuq unbinilium -			
				207 Uuq unbinilium -	208 Uuq unbinilium -	209 Uuq unbinilium -	210 Uuq unbinilium -			
				211 Uuq unbinilium -	212 Uuq unbinilium -	213 Uuq unbinilium -	214 Uuq unbinilium -			
				215 Uuq unbinilium -	216 Uuq unbinilium -	217 Uuq unbinilium -	218 Uuq unbinilium -			
				219 Uuq unbinilium -	220 Uuq unbinilium -	221 Uuq unbinilium -	222 Uuq unbinilium -			
				223 Uuq unbinilium -	224 Uuq unbinilium -	225 Uuq unbinilium -	226 Uuq unbinilium -			
				227 Uuq unbinilium -	228 Uuq unbinilium -	229 Uuq unbinilium -	230 Uuq unbinilium -			
				231 Uuq unbinilium -	232 Uuq unbinilium -	233 Uuq unbinilium -	234 Uuq unbinilium -			
				235 Uuq unbinilium -	236 Uuq unbinilium -	237 Uuq unbinilium -	238 Uuq unbinilium -			
				239 Uuq unbinilium -	240 Uuq unbinilium -	241 Uuq unbinilium -	242 Uuq unbinilium -			
				243 Uuq unbinilium -	244 Uuq unbinilium -	245 Uuq unbinilium -	246 Uuq unbinilium -			
				247 Uuq unbinilium -	248 Uuq unbinilium -	249 Uuq unbinilium -	250 Uuq unbinilium -			
				251 Uuq unbinilium -	252 Uuq unbinilium -	253 Uuq unbinilium -	254 Uuq unbinilium -			
				255 Uuq unbinilium -	256 Uuq unbinilium -	257 Uuq unbinilium -	258 Uuq unbinilium -			
				259 Uuq unbinilium -	260 Uuq unbinilium -	261 Uuq unbinilium -	262 Uuq unbinilium -			
				263 Uuq unbinilium -	264 Uuq unbinilium -	265 Uuq unbinilium -	266 Uuq unbinilium -			
				267 Uuq unbinilium -	268 Uuq unbinilium -	269 Uuq unbinilium -	270 Uuq unbinilium -			
				271 Uuq unbinilium -	272 Uuq unbinilium -	273 Uuq unbinilium -	274 Uuq unbinilium -			
				275 Uuq unbinilium -	276 Uuq unbinilium -	277 Uuq unbinilium -	278 Uuq unbinilium -			
				279 Uuq unbinilium -	280 Uuq unbinilium -	281 Uuq unbinilium -	282 Uuq unbinilium -			
				283 Uuq unbinilium -	284 Uuq unbinilium -	285 Uuq unbinilium -	286 Uuq unbinilium -			
				287 Uuq unbinilium -	288 Uuq unbinilium -	289 Uuq unbinilium -	290 Uuq unbinilium -			
				291 Uuq unbinilium -	292 Uuq unbinilium -	293 Uuq unbinilium -	294 Uuq unbinilium -			
				295 Uuq unbinilium -	296 Uuq unbinilium -	297 Uuq unbinilium -	298 Uuq unbinilium -			
				299 Uuq unbinilium -	300 Uuq unbinilium -	301 Uuq unbinilium -	302 Uuq unbinilium -			
				303 Uuq unbinilium -	304 Uuq unbinilium -	305 Uuq unbinilium -	306 Uuq unbinilium -			
				307 Uuq unbinilium -	308 Uuq unbinilium -	309 Uuq unbinilium -	310 Uuq unbinilium -			
				311 Uuq unbinilium -	312 Uuq unbinilium -	313 Uuq unbinilium -	314 Uuq unbinilium -			
				315 Uuq unbinilium -	316 Uuq unbinilium -	317 Uuq unbinilium -	318 Uuq unbinilium -			
				319 Uuq unbinilium -	320 Uuq unbinilium -	321 Uuq unbinilium -	322 Uuq unbinilium -			
				323 Uuq unbinilium -	324 Uuq unbinilium -	325 Uuq unbinilium -	326 Uuq unbinilium -			
				327 Uuq unbinilium -	328 Uuq unbinilium -	329 Uuq unbinilium -	330 Uuq unbinilium -			
				331 Uuq unbinilium -	332 Uuq unbinilium -	333 Uuq unbinilium -	334 Uuq unbinilium -			
				335 Uuq unbinilium -	336 Uuq unbinilium -	337 Uuq unbinilium -	338 Uuq unbinilium -			
				339 Uuq unbinilium -	340 Uuq unbinilium -	341 Uuq unbinilium -	342 Uuq unbinilium -			
				343 Uuq unbinilium -	344 Uuq unbinilium -	345 Uuq unbinilium -	346 Uuq unbinilium -			
				347 Uuq unbinilium -	348 Uuq unbinilium -	349 Uuq unbinilium -	350 Uuq unbinilium -			
				349 Uuq unbinilium -	350 Uuq unbinilium -	351 Uuq unbinilium -	352 Uuq unbinilium -			
				353 Uuq unbinilium -	354 Uuq unbinilium -	355 Uuq unbinilium -	356 Uuq unbinilium -			
				357 Uuq unbinilium -	358 Uuq unbinilium -	359 Uuq unbinilium -	360 Uuq unbinilium -			
				359 Uuq unbinilium -	360 Uuq unbinilium -	361 Uuq unbinilium -	362 Uuq unbinilium -			
				363 Uuq unbinilium -	364 Uuq unbinilium -	365 Uuq unbinilium -	366 Uuq unbinilium -			
				367 Uuq unbinilium -	368 Uuq unbinilium -	369 Uuq unbinilium -	370 Uuq unbinilium -			
				371 Uuq unbinilium -	372 Uuq unbinilium -	373 Uuq unbinilium -	374 Uuq unbinilium -			
				375 Uuq unbinilium -	376 Uuq unbinilium -	377 Uuq unbinilium -	378 Uuq unbinilium -			
				379 Uuq unbinilium -	380 Uuq unbinilium -	381 Uuq unbinilium -	382 Uuq unbinilium -			
				383 Uuq unbinilium -	384 Uuq unbinilium -	385 Uuq unbinilium -	386 Uuq unbinilium -			
				387 Uuq unbinilium -	388 Uuq unbinilium -	389 Uuq unbinilium -	390 Uuq unbinilium -			
				391 Uuq unbinilium -	392 Uuq unbinilium -	393 Uuq unbinilium -	394 Uuq unbinilium -			
				395 Uuq unbinilium -	396 Uuq unbinilium -	397 Uuq unbinilium -	398 Uuq unbinilium -			
				399 Uuq unbinilium -	400 Uuq unbinilium -	401 Uuq unbinilium -	402 Uuq unbinilium -			
				403 Uuq unbinilium -	404 Uuq unbinilium -	405 Uuq unbinilium -	406 Uuq unbinilium -			
				407 Uuq unbinilium -	408 Uuq unbinilium -	409 Uuq unbinilium -	410 Uuq unbinilium -			
				411 Uuq unbinilium -	412 Uuq unbinilium -	413 Uuq unbinilium -	414 Uuq unbinilium -			
				415 Uuq unbinilium -	416 Uuq unbinilium -	417 Uuq unbinilium -	418 Uuq unbinilium -			
				419 Uuq unbinilium -	420 Uuq unbinilium -	421 Uuq unbinilium -	422 Uuq unbinilium -			
				423 Uuq unbinilium -	424 Uuq unbinilium -	425 Uuq unbinilium -	426 Uuq unbinilium -			
				427 Uuq unbinilium -	428 Uuq unbinilium -	429 Uuq unbinilium -	430 Uuq unbinilium -			
				431 Uuq unbinilium -	432 Uuq unbinilium -	433 Uuq unbinilium -	434 Uuq unbinilium -			
				435 Uuq unbinilium -	436 Uuq unbinilium -	437 Uuq unbinilium -	438 Uuq unbinilium -			
				439 Uuq unbinilium -	440 Uuq unbinilium -	441 Uuq unbinilium -	442 Uuq unbinilium -			
				443 Uuq unbinilium -	444 Uuq unbinilium -	445 Uuq unbinilium -	446 Uuq unbinilium -			
				447 Uuq unbinilium -	448 Uuq unbinilium -	449 Uuq unbinilium -	450 Uuq unbinilium -			
				449 Uuq unbinilium -	450 Uuq unbinilium -	451 Uuq unbinilium -	452 Uuq unbinilium -			
				453 Uuq unbinilium -	454 Uuq unbinilium -	455 Uuq unbinilium -	456 Uuq unbinilium -			
				457 Uuq unbinilium -	458 Uuq unbinilium -	459 Uuq unbinilium -	460 Uuq unbinilium -			
				461 Uuq unbinilium -	462 Uuq unbinilium -	463 Uuq unbinilium -	464 Uuq unbinilium -			
				465 Uuq unbinilium -	466 Uuq unbinilium -	467 Uuq unbinilium -	468 Uuq unbinilium -			
				469 Uuq unbinilium -	470 Uuq unbinilium -	471 Uuq unbinilium -	472 Uuq unbinilium -			
				473 Uuq unbinilium -	474 Uuq unbinilium -	475 Uuq unbinilium -	476 Uuq unbinilium -			
				477 Uuq unbinilium -	478 Uuq unbinilium -	479 Uuq unbinilium -	480 Uuq unbinilium -			
				481 Uuq unbinilium -	482 Uuq unbinilium -	483 Uuq unbinilium -	484 Uuq unbinilium -			
				485 Uuq unbinilium -	486 Uuq unbinilium -	487 Uuq unbinilium -	488 Uuq unbinilium -			
				489 Uuq unbinilium -	490 Uuq unbinilium -	491 Uuq unbinilium -	492 Uuq unbinilium -			

Name: Index No. Class:



Bukit Batok Secondary School
PRELIMINARY EXAMINATION 2018
Sec 4 EXPRESS

CHEMISTRY

Paper 2

6092/02
15 August 2018
1030 - 1215
1 hour 45 minutes

Candidates answer on the Question Paper.
No Additional Materials are required.

READ THESE INSTRUCTIONS FIRST

Write your name, index number and class in the spaces provided at the top of this page.
Write in dark blue or black pen
You may use an HB pencil for any diagrams or graphs.
Do not use staples, paper clips, highlighters, glue or correction fluid.

Section A

Answer **all** questions in the spaces provided.

Section B

Answer all **three** questions, the last question is in the form of either/or.
Answer **all** questions in the spaces provided.

At the end of the examination, fasten all your work securely together.
The number of marks is given in brackets [] at the end of each question or part question.
A copy of the Periodic Table is given at the end of the paper.

The use of an approved scientific calculator is expected, where appropriate.

For Examiner's use	
Section A	/50
Section B	
B7	
B8	
B9	
Total	/80

This document consists of 23 printed pages.

Section A

Answer all the questions in this section in the spaces provided.

The total mark for this section is 50

A1(a) The grid below represents part of a blank periodic table, the numbers being the proton number of the elements.

In the grid below, write

- (i) **P** in a space which could be occupied by a noble gas which is used to fill weather balloons. [1]
- (ii) **Q** in a space which the most reactive non-metal would occupy. [1]
- (iii) **R** in a space which could be occupied by a metal with the lowest density. [1]
- (iv) **S** in a space which could be occupied by an element forming an amphoteric hydroxide. [1]
- (v) **T** in a space which could be occupied by an element with an isotope that can be represented by ${}^{14}_6X$. [1]

1							2
3	4	5	6	7	8	9	10
11	12	13	14	15	16	17	18

(b) (i) Describe how the metallic character of the elements in Period 3 changes across the period from left to right.

.....[1]

(ii) State how the metallic character of an element is related to its electronic structure.

..... [1]

(c) Explain what is meant by the term *periodicity*......
.....[1]

[Total: 8]

A2 Carbon atoms can bond to each other to produce a variety of different structures, including diamond, graphite and buckminsterfullerene.

(a) There are similarities and differences in the structure and bonding in diamond and graphite.

(i) Describe two features of the structure and bonding in diamond that are similar to graphite.

.....

.....

.....

..... [2]

(ii) Describe two features of the structure and bonding in diamond that are different from graphite.

.....

.....

.....

..... [2]

(b) Buckminsterfullerene is a form carbon with the formula C_{60} . If it is burned completely in oxygen, it forms carbon dioxide as the only product. Calculate the mass of carbon dioxide that is released when 51 g of buckminsterfullerene is completely burned in oxygen. [2]

(c) The structures of graphite and boron nitride are shown below.




(i) What is the chemical formula for boron nitride? [1]

(ii) Like graphite, boron nitride feels slippery to the touch.
Explain, in terms of bonding and structure, why boron nitride feels slippery to touch.

.....
.....
.....

..... [2]

(iii) The diagram below shows the structure of a solid form of carbon called graphene. Graphene contains **one layer** of carbon atoms. Graphene is made from graphite but it is harder than graphite.



Explain, using ideas about structure and bonding, why graphene is hard.

.....
..... [1]

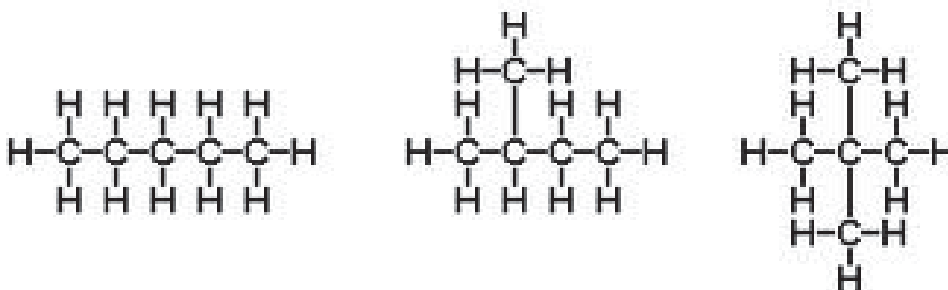
[Total: 10]

A3 Alkanes like propane and butane are found in Liquefied Petroleum Gases(LPG).

- (a) An experiment shows that complete combustion of 1.0 dm^3 (measured at room temperature and pressure) of butane produces 120 kJ of energy. Calculate a value for the enthalpy change of complete combustion (kJ/mol) of butane, giving the correct sign.

[1]

- (b)(i) The alkane with 5 carbon atoms, pentane exists as several isomers shown below. One is straight chain pentane while the other two are branched chain pentane.



Will the two isomers which are branched chain pentane have the same enthalpy change on complete combustion as the straight chain pentane? Explain your reasoning.

.....
[1]

- (ii) The table shows the enthalpy changes of combustion of hexane and heptane.

name	formula	enthalpy change of combustion / kJ/ mol
hexane	C_6H_{14}	-4163
heptane	C_7H_{16}	-4817

Using the data given, estimate the enthalpy change of combustion in kJ/mol of octane, C_8H_{18} . Explain the method you use to arrive at your answer.

.....

[2]

- (c) Some students studied the graph below that shows the amount of fossil fuel burned in the world between 1960 and 2010.

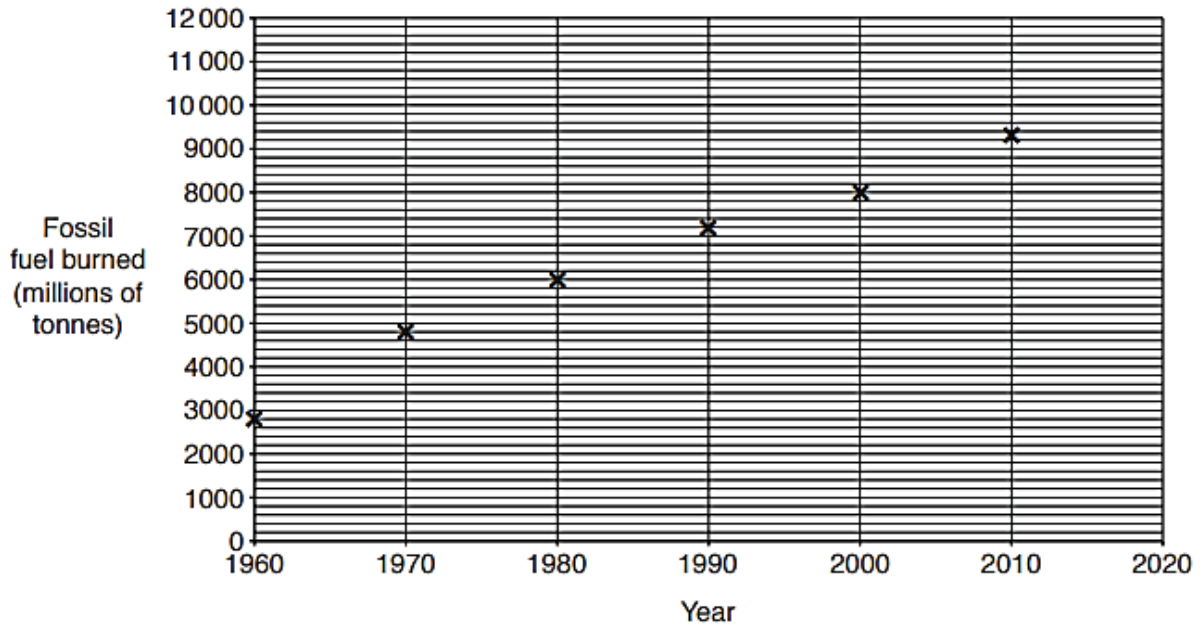


Fig 3.1

- (i) One student says that the amount of fossil fuels burned has increased by the same amount every ten years.
Is the student correct? Use data from the graph to justify your answer.

.....
 [1]

- (ii) Another student says that it is very difficult to estimate the amount of fossil fuel we will use in 100 years' time. Suggest reasons the student could give to justify this statement.

.....

 [2]

- (iii) The graph below shows the changes in average global temperature from 1960 to 2010.

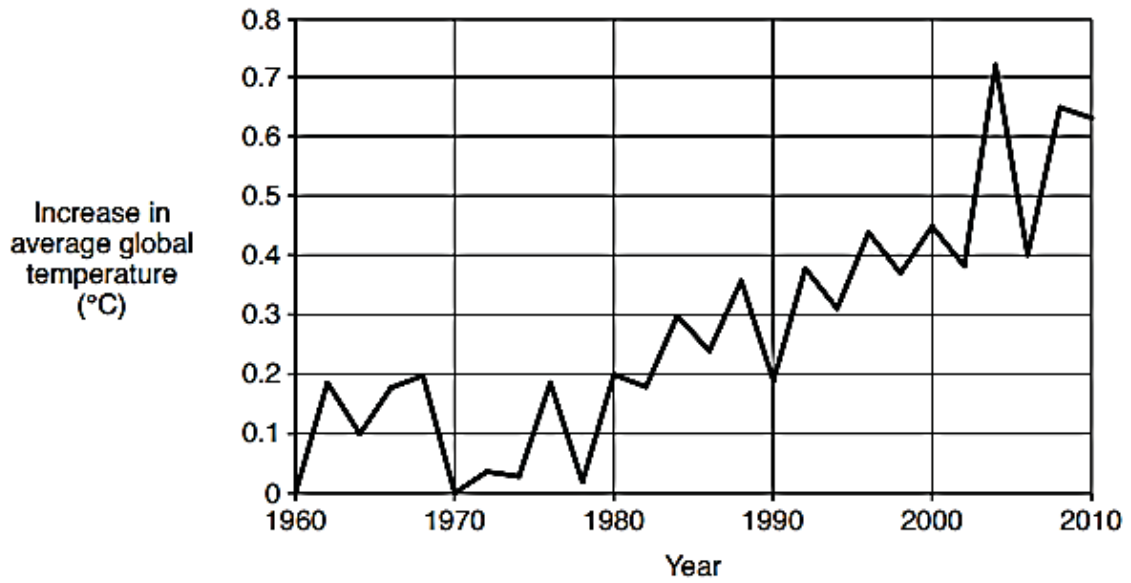


Fig 3.2

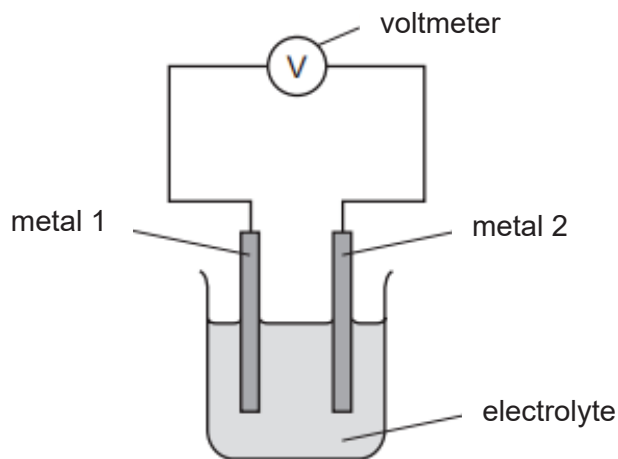
Describe the link between the trends shown in the graphs in Fig 3.1 and Fig 3.2.

.....

.....[1]
 [Total: 8]

A4 The diagram shows a simple cell, with two different metals as electrodes dipped in dilute nitric acid. A student did an experiment using the simple cell below. The voltages were recorded in the table.

- If the voltage measured is positive then metal 2 is more reactive than metal 1.
- If the voltage measured is negative then metal 1 is more reactive than metal 2.



		metal 2				
		beryllium	cobalt	nickel	silver	vanadium
metal 1	beryllium	0.0 V	-1.6 V	-1.6 V	not measured	-0.7 V
	cobalt		0.0 V	0.0 V	-1.1 V	0.9 V
	nickel			0.0 V	-1.1 V	0.9 V
	silver				0.0 V	2.0 V
	vanadium					0.0 V

(a) (i) In the simple cell containing nickel and silver, it was observed that the electrolyte slowly turned pale green. Write the ionic equation to explain the colour change.

.....[1]

(ii) What happened to the mass of the nickel electrode?

.....[1]

(b) (i) Using the data given, state the most reactive metal in the table above. Explain your reasoning.

.....

 [2]

(ii) Predict the voltage produced by a simple cell with beryllium as metal 1 and silver as metal 2.

.....[1]

- (c) (i) The student wanted to rank the metals listed in the table according to their reactivity but he was not able to do so. Why?

.....[1]

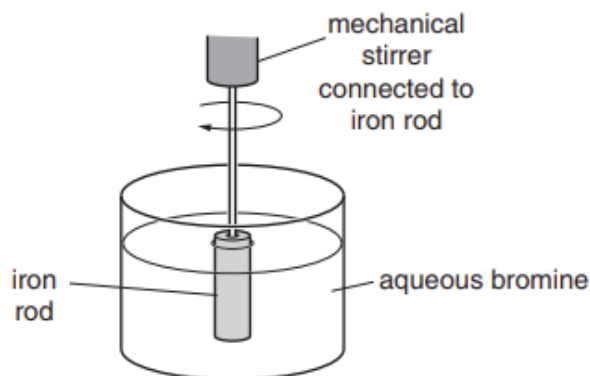
- (ii) Briefly describe one **simple** experiment the student can do which will help him to solve the problem in c(i).

.....

.....[1]

[Total: 7]

- A5** The rate of reaction of iron with aqueous bromine is determined by using the apparatus shown below.



The iron is removed at regular intervals. It is washed, dried and then weighed.

The iron is then replaced in the solution.

The experiment is repeated twice, each time with a different concentration of aqueous bromine at room temperature, 25 °C. The results are shown in the table below.

Experiment	concentration of aqueous bromine mol/dm ³	speed of reaction mg iron reacted/min
1	0.050	9.2
2	0.10	18.1
3	0.15	27.2

- (a) Describe how and explain why the speed of this reaction changes with concentration of bromine.

.....

.....

.....[2]

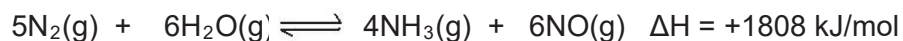
(b) (i) Experiment 1 is repeated after aqueous bromine has been cooled in an ice bath to 15°C.
 Predict the speed of reaction, with appropriate unit.....[1]

(ii) Using collision theory, explain your answer in **(b)(i)**.

 [2]

(c) Suggest another method for measuring the speed of this reaction.
[1]
 [Total: 6]

A6 Ammonia, NH₃, is a colourless, pungent-smelling gas which has been known to man from the beginning of recorded time. Chemists have discovered a novel way of ‘fixing’ atmospheric nitrogen (converting nitrogen gas into its compounds). Moist nitrogen is passed over a TiO₂ plate which has been coated with other chemicals. The nitrogen is thought to react with moisture in the air at room temperature and pressure to form ammonia.
 A possible equation for the reaction is given below.



(a) (i) Explain why there are only a few reactions that ‘fix’ nitrogen.

 [2]

(ii) Suggest and explain one advantage and one disadvantage of the process given in the equation above as a method of making ammonia compared with the Haber process.

 [2]

(b) 1.20 dm³ of ammonia gas was dissolved in water to form 200 cm³ of aqueous alkali at room temperature and pressure.

(i) Calculate how many moles of NH₃(g) was dissolved in water.

[1]

(ii) Write the equation for the neutralisation of aqueous ammonia, NH₃(aq) by dilute sulfuric acid.

..... [1]

(c) The decomposition of ammonia is represented by the following equation.



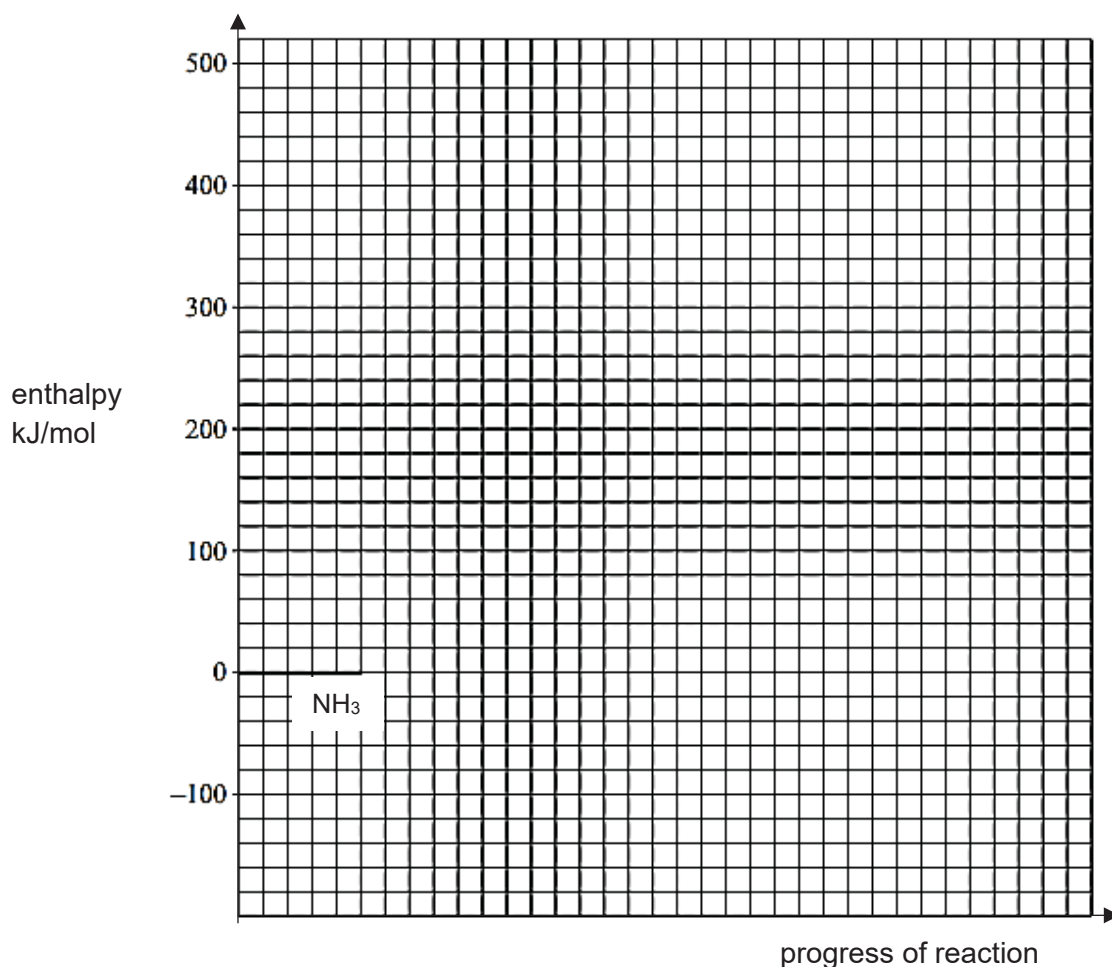
The activation energy, **E_a** for the uncatalysed reaction is 335 kJ/mol.

The activation energy, **E_a'** for the reaction when tungsten is used as a catalyst is 163 kJ/mol.

(i) On the grid provided on page 12, draw a **labelled** energy profile diagram for the uncatalysed and catalysed reactions.

[3]

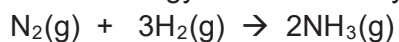
Include the necessary information given.



- (ii) When osmium is used as a catalyst, the activation energy is 197 kJ/mol. Which catalyst, osmium or tungsten, will cause ammonia to decompose at a faster rate? Explain your answer using ideas about particles.

.....

- (iii) State the activation energy for the uncatalysed reaction of the following: [1]



..... [1]
 [Total:11]

Section B

Answer **all** three questions in this section.

The last question is in the form of an either/or and only one of the alternatives should be attempted.

B7 Composition of sea water

The Earth's ocean holds about 1.5×10^{18} tonnes of water, which in turn contains 0.05×10^{18} tonnes of dissolved salts. The table below shows eight most common ions in the sea.

ion	% by mass of total dissolved solids	concentration in mol/dm ³
Chloride, Cl ⁻	55.04	0.535
Sodium, Na ⁺	30.42	0.457
Sulfate, SO ₄ ²⁻	7.69	0.028
Magnesium, Mg ²⁺	3.91	0.056
Calcium, Ca ²⁺	1.16	0.010
Potassium, K ⁺	1.10	0.0097
Carbonate, CO ₃ ²⁻	0.41	0.0023
Bromide, Br ⁻	0.19	0.00081

The dissolved ions in the sea form an essentially free source of materials to anyone with access to the sea. Evaporation of sea water produces sodium chloride and potassium chloride. The two other elements that can be obtained from sea water are bromine and magnesium.

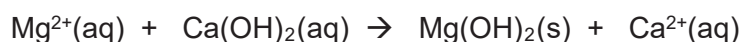
Uses of Magnesium

Magnesium is the lightest structural metal used today, some 30% lighter than aluminium. Magnesium is the third most used metal in construction (after iron and aluminium). Nearly 70% of the world production of magnesium is used to make alloys. One example is Magnox which is an alloy of magnesium with small amount of aluminium and other metals.

Extraction of magnesium

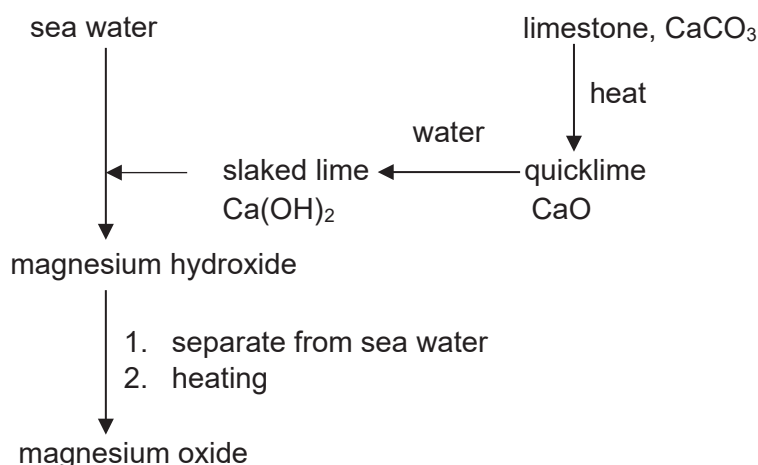
The first stage in the production of magnesium is to mix the sea water with a slurry of calcium hydroxide. This precipitates magnesium hydroxide.

This reaction can be represented as follows.

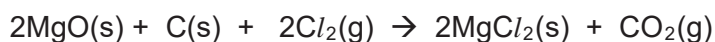


Magnesium hydroxide is then separated and heated to produce magnesium oxide.

The flow chart summarises the process mentioned



Conversion to magnesium chloride is achieved by heating the oxide, mixed with carbon, in a stream of chlorine at a high temperature in the furnace.



The resulting anhydrous magnesium chloride is fed into electrolytic cells. A schematic diagram of the electrolytic cell is shown below in Fig 7.1

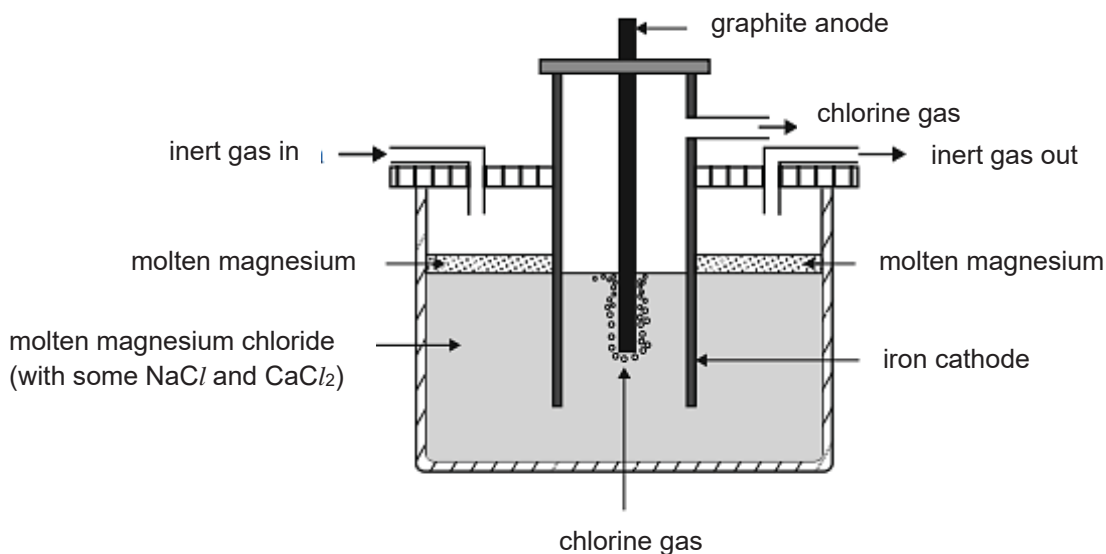


Fig 7.1

The design of this cell considers the following properties of both magnesium metal and magnesium chloride:

- molten magnesium reacts vigorously with oxygen
- at the temperature of molten magnesium chloride, magnesium is a liquid
- molten magnesium has a lower density than molten magnesium chloride and forms a separate layer on the surface.

- (a) Name the most abundant ionic compound in sea water and determine the effective concentration of this compound in mol/dm³.

[1]

- (b) (i) From the information given, deduce the trend in solubility of the Group II metal hydroxide as the proton number increases.

.....

.....[1]

- (ii) Calculate the mass of magnesium hydroxide precipitated when an excess of calcium hydroxide is added to 1000 dm³ of sea water.

[2]

- (c) (i) Write an ionic equation for the reaction at the cathode in the electrolytic cell.

..... [1]

- (ii) How does the design of the cell shown in the Fig 7.1, take into consideration the reaction of molten magnesium with oxygen?

.....

..... [1]

- (d) Electrolysis is an expensive process as high consumption of energy is needed. Using the information given, what is being done to lower the cost in industrial process?

.....

..... [1]

B8 (a) A student reacted together an alcohol and a carboxylic acid under appropriate conditions to produce an ester.
A sweet smelling organic liquid, **Q**, with the empirical formula C_2H_4O was produced. The M_r of **Q** was found by experiments to be 87.5.

(i) What is the molecular formula of **Q**? Show the necessary calculation. [1]

(ii) In the boxes below, draw the structural formula of **two** isomers with this formula that are **straight chain** esters. [2]

--	--

A sample of **Q** was heated with aqueous sulfuric acid. The product obtained was a mixture of the original alcohol and carboxylic acid. This mixture was heated under reflux with acidified potassium manganate(VII) to give a **single** product, **R**. The product, **R**, was collected and subjected to the following tests:

- A sample of **R** gave no reaction with aqueous bromine.
- A second sample of **R** gave an effervescence with sodium carbonate.
- A third sample of **R** is completely miscible with water.

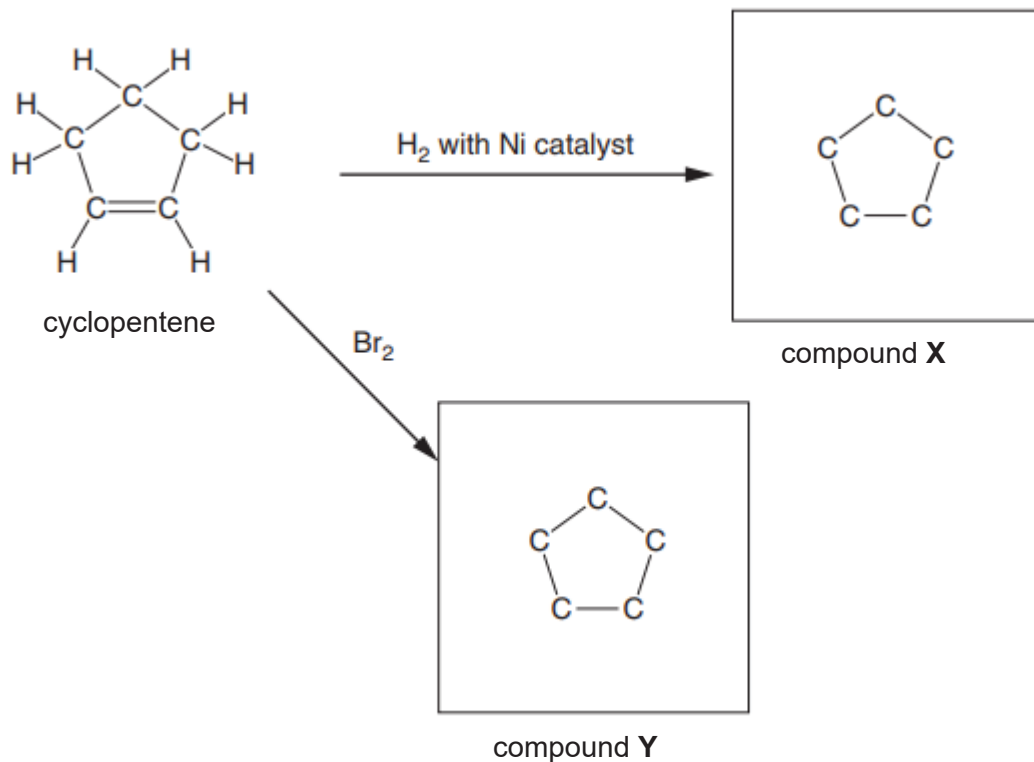
(iii) What is the identity of single organic compound **R**?

..... [1]

- (b) Cyclopentene is a cyclic alkene with the formula C_5H_8 . It is a colourless liquid with a petrol-like odour. It is used as a monomers for synthesis of plastics.

The figure below shows some reactions involving cyclopentene

- (i) Complete the partial structures of compounds **X** and **Y** which are the products of the reactions. [2]



- (ii) Write a balanced chemical equation to show the reaction between cyclopentene and aqueous bromine.

..... [1]

- (iii) Cyclopentene can be polymerised to give poly(cyclopentene). Draw a section of poly(cyclopentene) to show two repeat units. [1]

[Total: 8]

B9 Either

Aqueous iron(II) bromide is a pale green solution containing iron(II) ions and bromide ions. When chlorine is passed into aqueous iron(II) bromide, the colour of the solution changes from pale green to orange-red.

When the orange-red solution is heated, it gives off a brown vapour, leaving a yellow solution **S**. The brown vapour forms a dark orange liquid **T** on cooling. When ethene gas is bubbled into **T**, the dark orange colour disappears. Sodium hydroxide solution is added to solution **S** and a reddish brown precipitate was obtained.

(a) (i) Name liquid **T**. [1]

(ii) Draw 'dot-and-cross' diagram to show the electron arrangement in **T**.
Show only the outer electrons. [1]

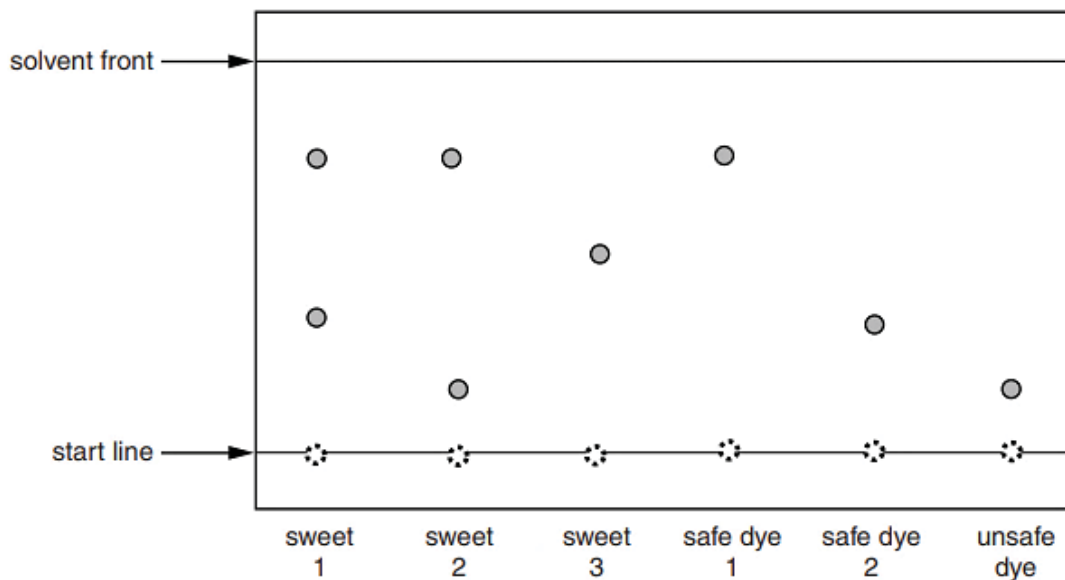
(b) Name the yellow compound present in solution **S**.
..... [1]

(c) (i) Construct a balanced chemical equation for the reaction in which **S** and **T** are formed.
..... [1]

(ii) In this reaction in which **S** and **T** are formed, name the oxidising agent.
Explain your answer, using **electron transfer**.
.....
.....
.....[2]

- (d) A student uses chromatography to analyse the food dyes used in a packet of sweets. The packet contains three different coloured sweets. He tests one sweet of each colour. He uses two known safe food dyes and one known unsafe dye as references.

The chromatogram below shows his results.



- (i) The student looks at the results and makes this statement:
 “The results show that it is possible that two of the sweets contain an unsafe dye.”
 Explain how the results of the chromatogram support the student’s conclusion.

.....

 [2]

- (ii) Calculate the R_f value of the unsafe dye given in the chromatogram above.

- (iii) The student also uses chromatography to identify the **flavourings** used in the sweets. He sprays his chromatogram with a locating agent.
 Why does he need to use a locating agent?

..... [1]

B9 Or

Both calcium and barium are elements in Group II of the Periodic Table. The trend of the reactivity of the elements in Group II is similar to that in Group I. Like Group I elements, calcium and barium form salts with the halogens.

The salt, calcium chloride, CaCl_2 , can be made by different reactions.

A student prepared hydrated calcium chloride by carrying out the following experiment.

- Step 1** The student added an excess of a solid calcium compound, **X**, to dilute hydrochloric acid. The mixture fizzed as the solid reacted.
- Step 2** The student filtered the mixture to give an aqueous solution of CaCl_2 .
- Step 3** On evaporation, colourless crystals of hydrated calcium chloride were formed.

(a) Why is calcium chloride an example of 'salt'?

.....

..... [1]

(b) A friend of the student suggested that solid **X** was calcium oxide. State one reason why the student's friend was **incorrect** and suggest a possible identity of solid **X**.

.....

.....

..... [2]

(c) Hydrated calcium chloride has a molar mass of 219 g/mol.

Determine the formula of **hydrated** calcium chloride.

You must show your working.

[2]

- (d) Calcium chloride can also be formed by directly reacting calcium with chlorine gas. Explain, using **oxidation states**, why the formation of calcium chloride from its elements, is a redox reaction.

.....
.....
.....[2]

- (e) The student decided to prepare barium sulfate, BaSO_4 , by adding barium metal to dilute sulfuric acid . Another student said this method should not be used to prepare the salt, barium sulfate. Give **two** reasons why the other student is correct.

.....
.....
.....
.....[2]

- (f) Barium atom has the electron arrangement 2, 8, 18, 18, 8, 2. Write the electron arrangement of the barium **ion**.

.....[1]

End of paper

2018 GCE O Prelim sec 4E Chemistry 6092 Paper 1**Answer & mark scheme**

No.	Ans	Remarks
1	D	(A) A boiling water bath has a temperature of 100°C, so if heat over water bath, CuSO ₄ .H ₂ O obtained (see eqn) (B) This will convert hydrated copper(II) sulfate to the anhydrous form. (C) Same as (B)
2	A	(See QA notes)
3	D	X has sulfate ion reacts with barium ion to form insoluble barium sulfate. This is not the reaction of the hydrogen ion in the acid.
4	B	Both aluminium ion and zinc ion forms white ppt which dissolves in excess aq NaOH giving colourless solution. Calcium ion forms white ppt that does not dissolve in excess aq NaOH.
5	B	
6	C	(add up nucleon no. given in the options and compare to 46)
7	D	(write down electron arrangement of ions given in the option and compare) Electron arrangement for: Ca ²⁺ 2,8,8 Cl ⁻ 2,8,8
8	D	(compare no. of protons and no. of electrons) X: 9 protons, 10 electrons so X is negative ion Y: 17 protons, 18 electrons, so Y is negative ion
9	B	(see the column for ability to conduct electricity in solid and in aq state)
10	C	(compare with N which is in Group V, compound of N and H is NH ₃ , so compound of P and H is PH ₃ . Check the no. of white dots which represent hydrogen atoms)
11	B	Mass of S = $\frac{\text{no. of S atom} \times \text{Ar of S}}{\text{Mr}}$ x mass of sample
12	B	
13	D	Mass of calcium carbonate in the chalk = 0.226 x 100 = 22.6g % purity = 22.6 / 23.0 x 100 = 98.3%
14	D	(compare the charge of the positive ion, eg Na ⁺ + e → Na)
15	C	Oxygen and hydrogen gas given off (see volumes of gas produced), so hydroxide ion and hydrogen ion discharged. In (1), copper(II) ion discharged instead of hydrogen ion. In (3), chloride ion discharged instead of hydroxide ion due to higher [Cl ⁻]
16	D	As reaction progresses: (A) Concentration of acid drops (B) More carbonate used (C) More gas produced
17	D	Reaction time, t = 1 / rate = 1 / 0.2 = 5.0 s
18	D	(2) is respiration which is exothermic. (see glucose react with oxygen). Both (1) and (3) are combustion of fuel so exothermic.

No.	Ans	Remarks
19	D	(assign oxidation numbers) In FeTiO_3 , oxidation number of Ti is +4, in TiO_2 , oxidation number is +4
20	A	Sodium chloride is neutral, does not react with hydrogen ions in the acid, so pH unchanged
21	C	Hydrochloric acid is strong acid, total ionization. ethanoic acid is weak acid, partial ionization.
22	A	Carbon dioxide is only produced in 2 nd reaction. Salt is produced in 1 st reaction.
23	D	(Recall properties of ammonium compound, apply this to methyl ammonium chloride) when ammonium chloride react with aq NaOH, ammonia gas, salt (sodium chloride) and water produced.
24	C	With calcium carbonate, soluble salts will be calcium chloride, calcium nitrate. NOT calcium sulfate as it is insoluble With copper(II) carbonate, soluble salts will be copper(II) chloride, copper(II) sulfate, copper(II) nitrate
25	B	Barium sulfate is insoluble, so need two soluble starting reagents. Barium carbonate is also insoluble. Add barium carbonate to dilute hydrochloric acid to form soluble barium chloride, before reacting with the second soluble reagent.
26	B	Copper will not react, remain as residue. Zinc react with dil hydrochloric acid to form colourless solution zinc chloride.
27	B	(A) Lead(II) oxide will be reduced by hydrogen gas to form lead and water (B) Magnesium is higher up in the reactivity series, so hydrogen is not able to reduce magnesium oxide (C) Carbon react with oxygen to form carbon dioxide (D) Sulfur react with oxygen to form sulfur dioxide
28	A	Both P and S are non-metals, so form acidic oxides which dissolves in water to form an acid.
29	C	Going down group II, the carbonate becomes more difficult to decompose. Both magnesium carbonate and calcium carbonate decomposes, but not barium carbonate.
30	C	(2) magnesium will displace silver from silver nitrate (4) magnesium will react with acid to form salt and hydrogen
31	D	Magnesium is a more reactive metal, so loses electron more easily.
32	A	Rusting uses up oxygen. Volume of oxygen used = $150 - 122 = 28 \text{ cm}^3$ % of oxygen = $28 / 150 \times 100 = 18.7\%$
33	A	Chlorine atom reacts with the ozone molecules, so choose the option with largest no. of chlorine atoms.
34	A	Y is C_6H_{14} , so it is hexane
35	A	Absence of uv light, so no substitution occurs
36	B	Cyclobutene – C_4H_6 , cyclopentane – C_5H_8 , cyclohexene – C_6H_{10}
37	B	The oil with the lowest bp will have the largest no. of C=C bonds.

No.	Ans	Remarks
38	D	It has C=C so will react with aq bromine With the -COOH, it is an organic acid, so react with metal and alcohol
39	D	(1) True, Hydrogen chloride gas produced (2) True, no more C=C in addition polymers (3) True, only the polymer is produced
40	B	

Sec 4E GCE O Prelim Chemistry 6092
Answers & mark scheme

The paper was

- A1a(i) P – box 2; Q – box 9; R – box 3; S – box 13 T – box 6 [1] each
 (b) (i) elements becomes less metallic. [1]
 (ii) metallic elements have fewer outer / valence electrons. [1]
 (c) periodicity is a repeating pattern (across different periods) [1]
- [Total: 8]

- A2a(i) Both consists entirely of **carbon** atoms joined by **covalent** bonds; [1]
 Both have giant lattice (or giant molecular) [1]
 ii. In diamond every carbon atom is bonded to four other carbon atoms, but in graphite, each carbon atom is bonded to 3 atoms;
 diamond has a tetrahedral arrangement of atoms but graphite has a layered arrangement;
 graphite has delocalised electrons unlike diamond which do not. [any 2]
 b. No. of mole of $C_{60} = 51 / 720 = 0.0708$ (eqn – optional)
 No. of mole of $CO_2 = 60 \times$ no. of mole of $C_{60} = 0.0708 \times 60 = 4.24$ [1]
 Mass of $C_{60} = 4.24 \times 44 = 187$ g [1]
 c(i) BN [1]
 ii. weak Van der Waal (or intermolecular) forces of attraction between layers; [1]
 layers of **atoms** can slide over each other. [1]
 iii. graphene has **many** strong covalent bond between carbon atoms. [1]
- [Total: 10]

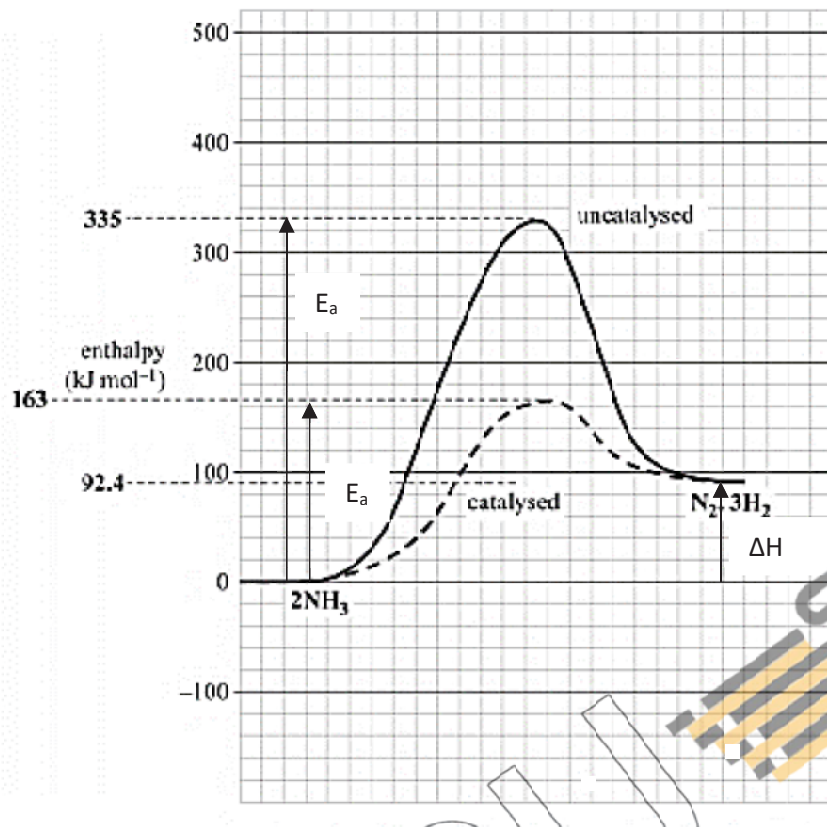
- A3a. $\Delta H = - 24 \times 120 = - 2880$ kJ/mol [reject if no unit and sign] [1]
 b(i) Yes, same(not similar) type bond and same number of bond [1]
 ii. difference in $\Delta H = 4817 - 4163 = 654$ kJ [1]
 from hexane to heptane, increase in one CH_2 group
 from heptane to octane, same increase of one CH_2 group
 so ΔH for octane = $-(4187 + 654) = -5471$ kJ/mol [1]
 c(i) No, quote any two data that shows a difference for every ten years. [1]
 Egs of data that can be used: 1960 -70, 2000 millions of tons bigger than 1970 to 80
 which has increase 1200 millions of tons, or 1990 – 2000, increase of 800 millions of
 tons smaller than 2000 – 2010 increase of 1300 millions of tons.
 ii. alternative / renewable forms of energy being used; [1]
 fossil fuel running out. [1]
 iii. As the amount of fossil fuel burnt increase, the increase average global temperature is
 higher. [1]
- [Total: 8]

- A4a(i) $Ni(s) \rightarrow Ni^{2+}(aq) + 2e$ [1]
 ii. mass decrease [1]

- b(i) beryllium; [1]
It has the largest voltage with cobalt/nickel [1]
- ii. $-2.7 \text{ V (V + Ag) + (V + Be)}$ [1]
- c(i). both nickel and cobalt has the same reactivity [1]
- ii. Place a piece of nickel in cobalt nitrate solution. If nickel displaces cobalt, nickel is more reactive than cobalt. [1]
- [Total: 7]

- A5a. As concentration increases, the speed of this reaction increases. When concentration increases, there is greater number of particles in the same volume [1]
Particles are closer to each other so frequency of effective collision increases. [1]
- b(i) 4.5 – 5.0 mg iron reacted/min (units needed)
- ii. As temperature drops, particles loses energy, move slower. [1]
Number of particles with energy equal to or greater than activation energy drops. [1]
Frequency of effective collision decreases.
- c. measure the colour intensity of aqueous bromine. [1]
- [Total: 6]

- A6a(i) $\text{N}\equiv\text{N}$ triple bond; [1]
A lot of energy is needed to break the (strong covalent) bond [1]
- ii. Advantage: lower temperature / lower pressure so save energy, lesser fossil fuel, or water, instead of hydrogen, water is used, so cheaper [1]
Disadvantage: nitrogen oxide produced, reacts with oxygen to form nitrogen dioxide which contribute to acid rain / an air pollutant [1]
- b(i) no. of moles of ammonia = $1.20 / 24 = 0.05$ [1]
- (ii) $2\text{NH}_3(\text{aq}) + \text{H}_2\text{SO}_4(\text{aq}) \rightarrow (\text{NH}_4)_2\text{SO}_4(\text{aq})$ (state symbols not needed) [1]
[1]
- c(i) correct shape and location for both graphs [1m each]
correct labels of E_a , E_a'' and ΔH [1]



- b(ii) Tungsten: with it, the reaction has a **lower activation energy**; which means the **higher** proportion of collisions that are successful between ammonia molecules will be higher (not more collisions, both points needed) [1]
- (iii) $E_a = 243 \text{ kJ/mol}$ (units needed) [1]
- [Total: 11]

Section B

- B7a. sodium chloride, $\text{Conc}(\text{mol}/\text{dm}^3) = 0.457$ (sodium ion is the limiting reactant) [1]
- b(i) as the proton number increases, the group II metal hydroxide becomes more soluble [1]
- ii. no. of mol of Mg^{2+} in 1000 dm^3 sea water = $0.056 \times 1000 = 56$ mols [1]
 no. of mol of $\text{Mg}(\text{OH})_2 = \text{no. of mol of } \text{Mg}^{2+} = 56 \text{ mol}$
 mass of $\text{Mg}(\text{OH})_2 = 58 \times 56 = 3248 \text{ g}$ [1]
- c(i) $\text{Mg}^{2+}(\text{l}) + 2\text{e} \rightarrow \text{Mg}(\text{l})$ [1]
- ii an inert gas, instead of air, is blown through the cathode compartment above molten magnesium [1]
- d. sodium chloride and calcium chloride is added to molten magnesium chloride to **lower the melting point**, saving energy. [1]
- e. at the anode, silver will be oxidised instead of chloride ion. Silver ion would be produced rather than chlorine at the anode. [1]
 $\text{Ag}(\text{s}) \rightarrow \text{Ag}^+(\text{l}) + \text{e}$ [1]
 the silver ion would move to the cathode, get discharged and silver is produced instead at the cathode. [1]

- f. chlorine gas produced during electrolysis is used to convert magnesium oxide to magnesium chloride at the furnace. [1]
- g. magnesium ion, aluminium ion, **delocalised** electron [all three correct -1]

[Total: 12]

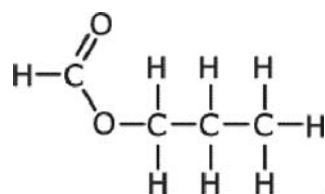
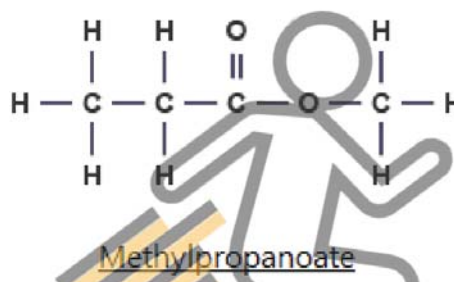
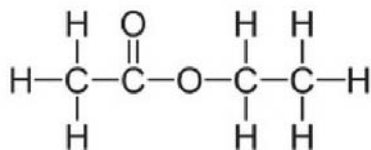
B8a(i) relative mass of $C_2H_4O = 44$

$M_r \sim 88$

$N = 88 / 44 = 2$

Relative molecular formula is $C_4H_8O_2$ [1]

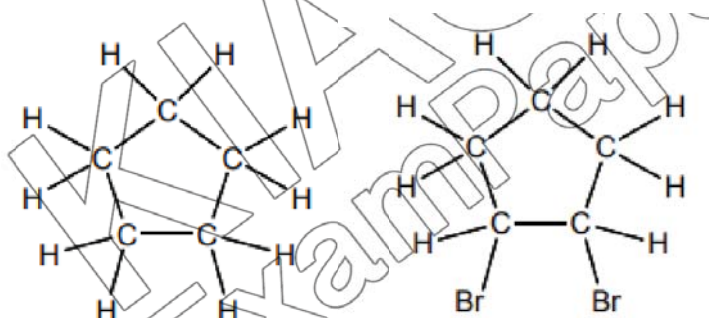
ii. ethyl ethanoate



propyl methanoate [any 2]

iii. ethanoic acid [1]

b(i)



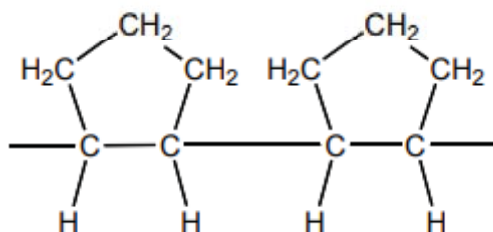
Compound X

compound Y

[1m for each, all H atoms needed]

ii. $C_5H_8 + Br_2 \rightarrow C_5H_8Br_2$ [1]

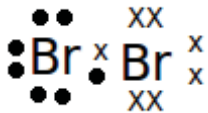
iii.



[Must have at least two repeat units and the free bonds at the end. All carbon-carbon bonds in the polymer chain must be shown.] [1]

[Total: 8]

B9 Either

- a(i) bromine [1]
 ii (dot-cross diagram of bromine molecule,  [1]
- b. iron(III) chloride [1]
 c(i) $3\text{Cl}_2 + 2\text{FeBr}_2 \rightarrow 2\text{FeCl}_3 + 2\text{Br}_2$ [1]
 [1]
 ii. chlorine [1]
 chlorine removes electrons from iron(II) ion and bromide ion. [1]
 d(i) sweet 2 contains an unsafe dye; [1]
 unknown dye in sweet 3 does not match up with a safe dye [1]
 ii. $0.8 / 5.2 = 0.154$ (or 0.15) [1]
 iii. to see the spots / make the colourless spots visible [1]
 (ignore 'find / identify the spots')

[Total: 10]

B9 Or

- a. Hydrogen ion / H^+ ion in acid replaced by calcium ion / Ca^{2+} ion or metal ion. [1]
 b. The reaction produced a **gas** / calcium oxide does not produce a **gas** in reaction with acid. [1]
 calcium carbonate. [1]
 c. Mr of $\text{CaCl}_2 = 111$.
 No. of water molecules = $\frac{219 - 111}{18}$ [1]
 = 6
 Formula: $\text{CaCl}_2 \cdot 6\text{H}_2\text{O}$ [6 and $\text{CaCl}_2 \cdot 6\text{H}_2\text{O}$ score the 2nd mark, allow no dot, $\text{CaCl}_2 6\text{H}_2\text{O}$] [1]
 d. Calcium is oxidised as oxidation state of calcium increases from 0 to +2 [1]
 Chlorine is reduced as oxidation state of chlorine decreases from 0 to -1 [1]
 e. barium is very reactive metal, so react violently with the acid, reaction not safe; [1]
 barium sulfate formed is insoluble, so form a barrier on barium, preventing further reaction. [1]
 (ii) 2, 8, 18, 18, 8 [1]

[Total:10]

