

Visit

FREETESTPAPER.com

for more papers



Website: [freetestpaper.com](http://www.freetestpaper.com)



[Facebook.com/freetestpaper](https://www.facebook.com/freetestpaper)



[Twitter.com/freetestpaper](https://www.twitter.com/freetestpaper)



Geylang Methodist School (Secondary) Preliminary Examination 2018

5076/01

SCIENCE (PHYSICS/CHEMISTRY)

Paper 1 Multiple Choice

Sec 4 Express
Sec 5 Normal (A)

Additional materials: Optical Answer Sheet

1 hour

Setter :

Mr Iskander

24 August 2018

READ THESE INSTRUCTIONS FIRST

Write in soft pencil.

Do not use staples, paper clips, highlighters, glue or correction fluid.

Write your name, index number and class on the Optical Answer Sheet in the spaces provided.

There are **forty** questions on this paper. Answer **all** questions. For each question there are four possible answers **A, B, C** and **D**.

Read the instructions on the Optical Answer Sheet very carefully.

Each correct answer will score one mark. A mark will not be deducted for a wrong answer.

Any rough working should be done in this booklet.

Gravitational field strength is assumed to be 10 N/kg unless otherwise specified.

A copy of the Periodic Table is printed on page .

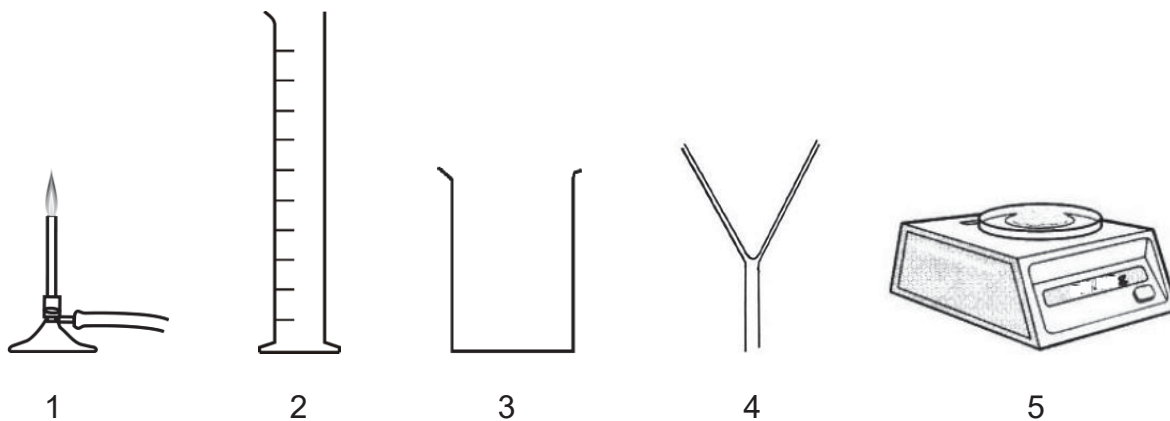
This document consists of printed pages.

[Turn over

- 1 Silver chloride is insoluble in water.

Silver chloride is made by adding 20.0 cm^3 of aqueous silver nitrate to 20.0 cm^3 of dilute hydrochloric acid.

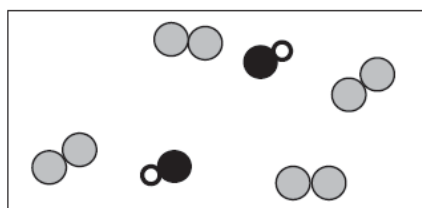
Which pieces of apparatus are needed to obtain solid silver chloride from aqueous silver nitrate and dilute hydrochloric acid?



- A** 1, 2 and 4 **B** 1, 4 and 5
C 2, 3 and 4 **D** 2, 4 and 5

- 2 The diagram below shows the arrangement of gases in a balloon.

Which pair of gases could be in the balloon?



- A** argon and hydrogen chloride
B argon and nitrogen
C hydrogen and nitrogen
D hydrogen chloride and nitrogen

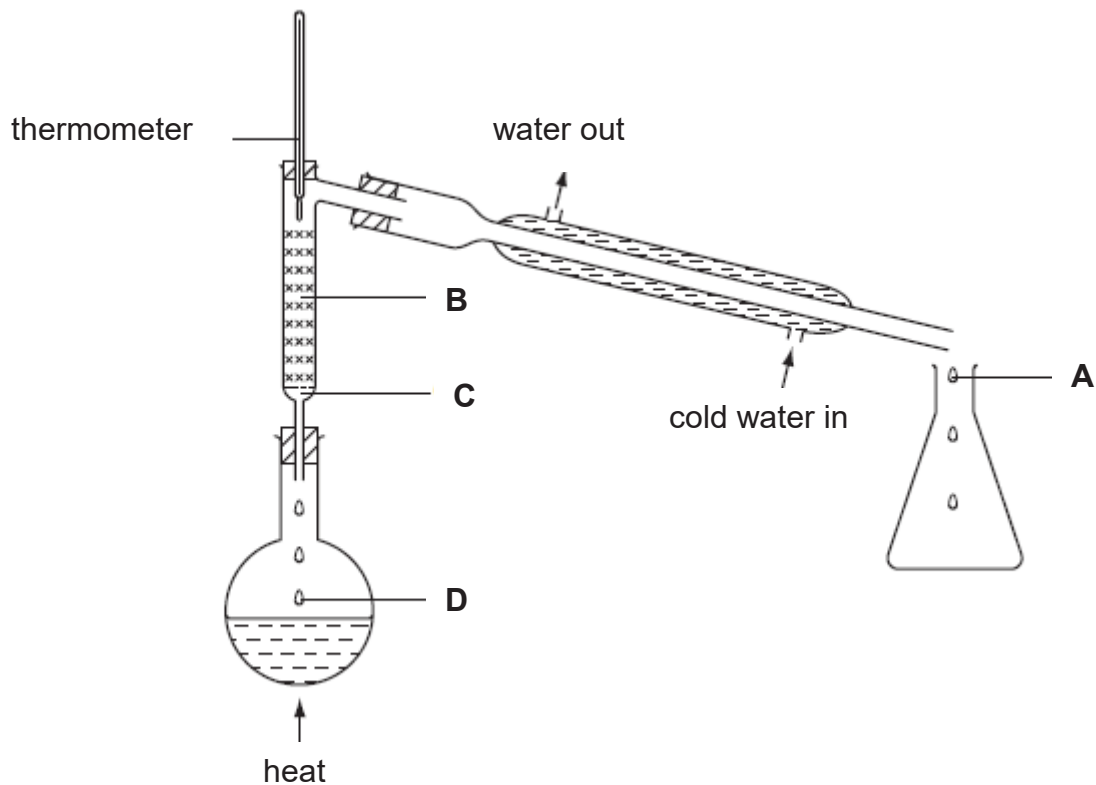
- 3 Salt can be separated from sand by using the processes shown.

What is the correct order for the processes?

	first	—————→			last
A	filter	dissolve	evaporate	crystallise	
B	dissolve	evaporate	crystallise	filter	
C	dissolve	evaporate	filter	crystallise	
D	dissolve	filter	evaporate	crystallise	

- 4 A mixture containing equal volumes of two liquids that mix completely but do not react together is placed in the apparatus shown and heated until the thermometer first shows a steady reading.

At which position will there be the highest proportion of the liquid with the lower boiling point?



- 5 Which of the following changes will result in the particles moving at a higher speed?

- A** $I_2(g) \rightarrow I_2(s)$
B $CO_2(s) \rightarrow CO_2(g)$
C $H_2O(l) \rightarrow H_2O(s)$
D $N_2(g) \rightarrow N_2(l)$

- 6 An imaginary element Gemsium(Gm) contains 111 protons and 141 neutrons.

Which one of the following represents an atom of Gemsium?

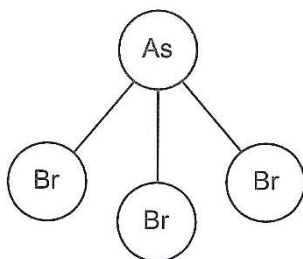
- A ${}_{30}^{141}\text{Gm}$
 B ${}_{111}^{141}\text{Gm}$
 C ${}_{141}^{111}\text{Gm}$
 D ${}_{111}^{252}\text{Gm}$

- 7 The nucleon number and proton number of an atom of P and atom of Q are shown.

	P	Q
nucleon number	85	80
proton number	37	35

Which statement about P and Q is correct?

- A An atom of P has fewer electrons than an atom of Q.
 B An atom of P has more neutrons than an atom of Q.
 C P is above Q in the same group of the Periodic Table.
 D P is in the same period in the Periodic Table as Q.
- 8 A molecule of arsenic bromide, AsBr_3 , has the structure shown.



Which properties could be correct for arsenic bromide?

	melting point/ $^{\circ}\text{C}$	electrical conductivity at room temperature
A	31	does not conduct
B	39	conducts
C	650	conducts
D	755	does not conduct

- 9 A student thinks that element Q is a metal because it has a high melting point and a high boiling point.

What other properties could element Q have if it is a metal?

- 1 Q conducts electricity when solid.
- 2 Q forms an acidic oxide, QO_2 .
- 3 Q is malleable.

- A** 1, 2 and 3 **B** 1 and 2 only
C 1 and 3 only **D** 2 and 3

- 10 In the Periodic Table, caesium, lithium and sodium are in the same group.

Which statement about caesium is likely to be correct?

- A** It forms a nitrate, $\text{Cs}(\text{NO}_3)_2$.
B It forms an insoluble hydroxide.
C It has a density greater than potassium.
D It reacts slowly with water at room temperature.

- 11 Astatine is at the bottom of Group VII in the Periodic Table.

Which of the following is a property of astatine?

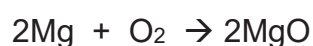
- A** It forms a basic oxide.
B It is a good conductor of electricity.
C It forms a covalent compound of formula NaAt .
D It is displaced by chlorine from aqueous potassium astatide.

- 12 When two aqueous solutions are mixed in a test-tube, a reaction occurs and the test-tube feels hot.

Which statement is correct?

- A** An exothermic reaction takes place as the reacting chemicals gain energy.
B An exothermic reaction takes place as the reacting chemicals lose energy.
C An endothermic reaction takes place as the reacting chemicals gain energy.
D An endothermic reaction takes place as the reacting chemicals lose energy.

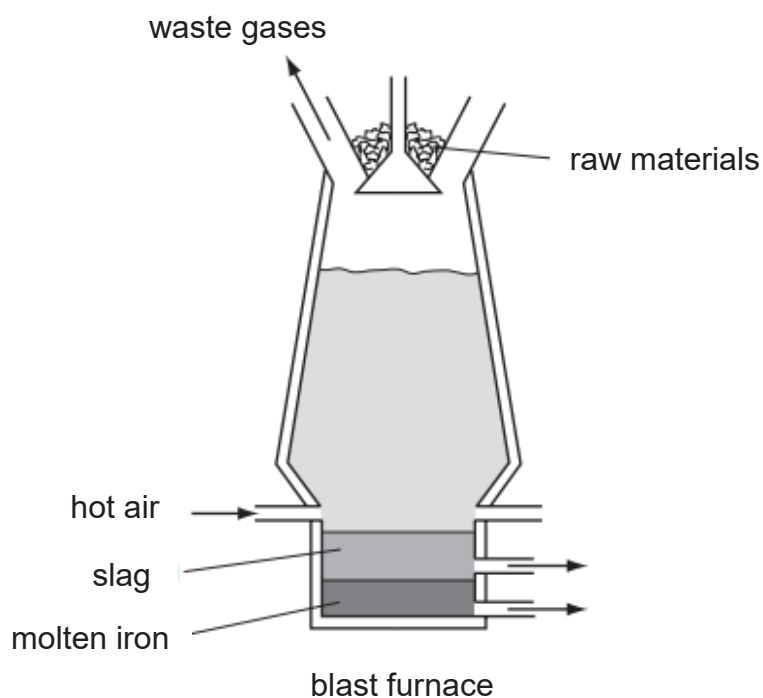
- 13 2.0 g of magnesium are completely burnt in pure oxygen.



Which volume of oxygen is used in this reaction at room temperature and pressure?

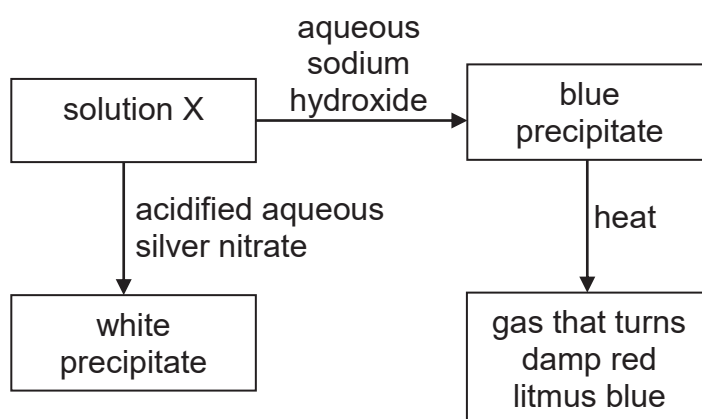
- A** 0.5 dm³ **B** 1.0 dm³
C 1.5 dm³ **D** 2.0 dm³

- 14 Iron is produced in a blast furnace as shown in the diagram below.



Which statement about this process is correct?

- A** Carbon is oxidised to carbon dioxide.
B Carbon monoxide is produced by the thermal decomposition of calcium carbonate.
C Haematite is reduced by calcium carbonate.
D Impurities are removed by the hot air blast.
- 15 The diagram below shows some of the reactions of solution X.

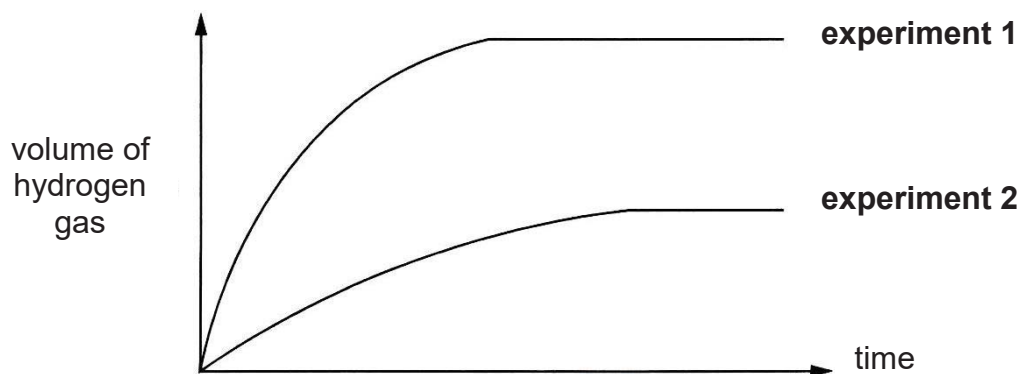


Which of the following the substance(s) is/are present in solution X?

- A** copper(II) nitrate only
B ammonium chloride only
C zinc nitrate and copper(II) nitrate
D ammonium chloride and copper(II) chloride

- 16 Zinc powder was added to excess dilute sulfuric acid at room temperature. The volume of hydrogen gas produced was measured over a period of time.

The graph labelled **experiment 1** shown below was obtained.



Which change was made to obtain the results shown in **experiment 2**?

- A Half the mass of zinc granules was used.
 - B Half the concentration of dilute sulfuric acid was used.
 - C Larger zinc strip of the same mass was used.
 - D Dilute sulfuric acid at lower temperature was used.
- 17 Crude oil is fractionally distilled into useful fractions.

Which option matches the fraction to its use?

	fraction	use
A	bitumen	feedstock for the petrochemical industry
B	diesel oil	fuel for aircraft engines
C	petrol	fuel for engines in buses, lorries and trains
D	petroleum gas	fuel for cooking and heating

- 18 Many countries have taken measures to ensure that the amount of sulfur in unleaded petrol and diesel fuels are kept low.

Which of the following could be the reason for such measures?

- A To cut down the amount of fuel used in vehicles.
- B To reduce the acidity of the rain.
- C To reduce incomplete combustion.
- D To prevent the pH of soil from increasing.

19 Which reaction describes the following equation?



- A** addition
C oxidation
- B** cracking
D substitution

20 The table shows the observations made when an organic compound X reacts with aqueous bromine and acidified potassium manganate (VII).

reagent	observation
aqueous bromine	no change
acidified potassium manganate(VII)	purple solution turns colourless

What is compound X?

- A** ethane
C methanol
- B** ethanoic acid
D propene

End of paper

DATA SHEET
The Periodic Table Of Elements

Group		I	II	III	IV	V	VI	VII	0		
		<div style="border: 1px solid black; padding: 2px; display: inline-block;"> 1 H hydrogen 1 </div>									
		<div style="border: 1px solid black; padding: 5px; display: inline-block;"> Key proton (atomic) number atomic symbol name relative atomic mass </div>									
3	4	5	6	7	8	9	10	11	12		
Li lithium 7	Be beryllium 9	B boron 11	C carbon 12	N nitrogen 14	O oxygen 16	F fluorine 19	Ne neon 20	Na sodium 23	Mg magnesium 24		
11	12	13	14	15	16	17	18	19	20		
Na sodium	Mg magnesium	Al aluminium	Si silicon	P phosphorus	S sulfur	Cl chlorine	Ar argon	K potassium	Ca calcium		
19	20	21	22	23	24	25	26	27	28		
K potassium	Ca calcium	Sc scandium	Ti titanium	V vanadium	Cr chromium	Mn manganese	Fe iron	Co cobalt	Ni nickel		
37	38	39	40	41	42	43	44	45	46		
Rb rubidium	Sr strontium	Y yttrium	Zr zirconium	Nb niobium	Mo molybdenum	Tc technetium	Ru ruthenium	Rh rhodium	Pd palladium		
55	56	57 – 71	72	73	74	75	76	77	78		
Cs caesium	Ba barium	lanthanoids	Hf hafnium	Ta tantalum	W tungsten	Re rhenium	Os osmium	Ir iridium	Pt platinum		
87	88	89 – 103	104	105	106	107	108	109	110		
Fr francium	Ra radium	actinoids	Rf rutherfordium	Db dubnium	Sg seaborgium	Bh bohrium	Hs hassium	Mt meitnerium	Ds darmstadtium		
133	137	138	178	181	184	186	190	192	195		
85	88	89	91	93	96	96	101	103	106		
85	88	89	91	93	96	96	101	103	106		
85	88	89	91	93	96	96	101	103	106		
85	88	89	91	93	96	96	101	103	106		
85	88	89	91	93	96	96	101	103	106		
85	88	89	91	93	96	96	101	103	106		
85	88	89	91	93	96	96	101	103	106		
85	88	89	91	93	96	96	101	103	106		
85	88	89	91	93	96	96	101	103	106		
85	88	89	91	93	96	96	101	103	106		
85	88	89	91	93	96	96	101	103	106		
85	88	89	91	93	96	96	101	103	106		
85	88	89	91	93	96	96	101	103	106		
85	88	89	91	93	96	96	101	103	106		
85	88	89	91	93	96	96	101	103	106		
85	88	89	91	93	96	96	101	103	106		
85	88	89	91	93	96	96	101	103	106		
85	88	89	91	93	96	96	101	103	106		
85	88	89	91	93	96	96	101	103	106		
85	88	89	91	93	96	96	101	103	106		
85	88	89	91	93	96	96	101	103	106		
85	88	89	91	93	96	96	101	103	106		
85	88	89	91	93	96	96	101	103	106		
85	88	89	91	93	96	96	101	103	106		
85	88	89	91	93	96	96	101	103	106		
85	88	89	91	93	96	96	101	103	106		
85	88	89	91	93	96	96	101	103	106		
85	88	89	91	93	96	96	101	103	106		
85	88	89	91	93	96	96	101	103	106		
85	88	89	91	93	96	96	101	103	106		
85	88	89	91	93	96	96	101	103	106		
85	88	89	91	93	96	96	101	103	106		
85	88	89	91	93	96	96	101	103	106		
85	88	89	91	93	96	96	101	103	106		
85	88	89	91	93	96	96	101	103	106		
85	88	89	91	93	96	96	101	103	106		
85	88	89	91	93	96	96	101	103	106		
85	88	89	91	93	96	96	101	103	106		
85	88	89	91	93	96	96	101	103	106		
85	88	89	91	93	96	96	101	103	106		
85	88	89	91	93	96	96	101	103	106		
85	88	89	91	93	96	96	101	103	106		
85	88	89	91	93	96	96	101	103	106		
85	88	89	91	93	96	96	101	103	106		
85	88	89	91	93	96	96	101	103	106		
85	88	89	91	93	96	96	101	103	106		
85	88	89	91	93	96	96	101	103	106		
85	88	89	91	93	96	96	101	103	106		
85	88	89	91	93	96	96	101	103	106		
85	88	89	91	93	96	96	101	103	106		
85	88	89	91	93	96	96	101	103	106		
85	88	89	91	93	96	96	101	103	106		
85	88	89	91	93	96	96	101	103	106		
85	88	89	91	93	96	96	101	103	106		
85	88	89	91	93	96	96	101	103	106		
85	88	89	91	93	96	96	101	103	106		
85	88	89	91	93	96	96	101	103	106		
85	88	89	91	93	96	96	101	103	106		
85	88	89	91	93	96	96	101	103	106		
85	88	89	91	93	96	96	101	103	106		
85	88	89	91	93	96	96	101	103	106		
85	88	89	91	93	96	96	101	103	106		
85	88	89	91	93	96	96	101	103	106		
85	88	89	91	93	96	96	101	103	106		
85	88	89	91	93	96	96	101	103	106		
85											



Geylang Methodist School (Secondary)

End of Year Examination 2018

Candidate
Name

Class

Index Number

SCIENCE

5076/03, 5078/03

Paper 3 Chemistry

**Sec 4 Express
Sec 5 Normal (A)**

Additional Materials : Writing Paper

1 hour 15 minutes

Setter: Miss Ng Sio Ying

17 August 2018

READ THESE INSTRUCTIONS FIRST

Write your name, index number and class on all the work you hand in.
Write in dark blue or black pen.
You may use a pencil for any diagrams, graphs, tables or rough working.
Do not use staples, paper clips, highlighters, glue or correction fluid.

Section A

Answer **all** questions.
Write your answers in the spaces provided on the question paper.

Section B

Answer **all** questions.
Write your answers in the spaces provided on the question paper.

A copy of the Periodic Table is printed on page 14.

INFORMATION FOR CANDIDATES

The number of marks is given in brackets [] at the end of each question or part question.

For Examiner's Use	
Section A	/45
Section B	
.....	/10
.....	/10
Total	/65

2 Fig. 2.1 shows some reactions of copper(II) nitrate, $\text{Cu}(\text{NO}_3)_2$.

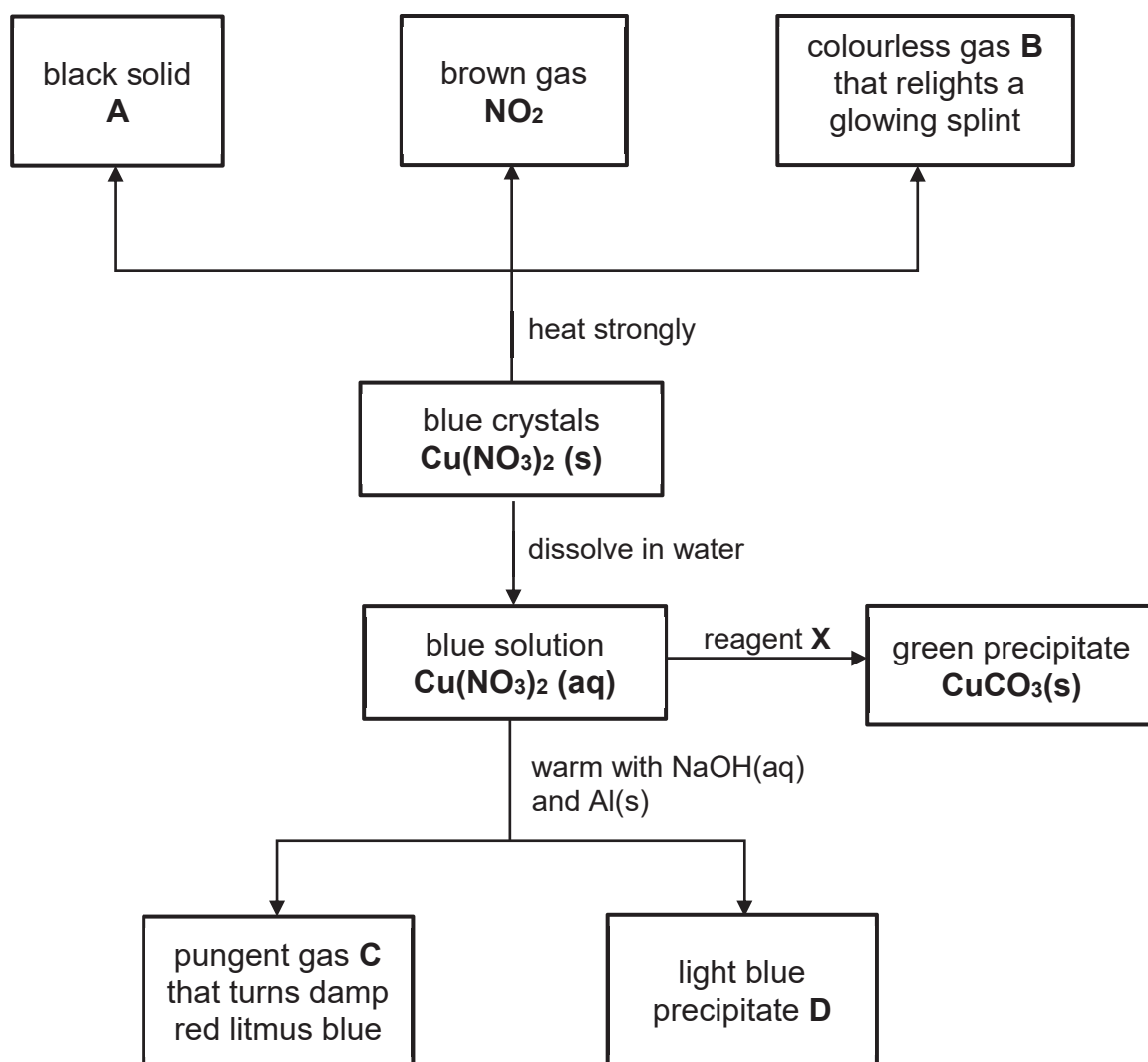


Fig. 2.1

(a) Identify the substances **A** – **D**.

A

B

C

D

[4]

- 3** Titanium, Ti, is a metal used in the aerospace industry. It exists naturally as titanium-iron oxide, FeTiO_3 , in a mineral called ilmenite. To extract titanium, the compound is first converted to titanium tetrachloride, TiCl_4 , which is being heated to 2000°C with magnesium in an atmosphere of a noble gas, argon.

The extraction of titanium from its chloride is represented by the following equation.



- (a)** What is the mass of magnesium chloride formed when 12 kg of titanium is extracted?
[Relative atomic masses: A_r : Ti, 48; Mg, 24; Cl, 35.5]

mass of magnesium chloride = kg [2]

- (b)** Calculate the smallest mass of titanium-iron oxide, FeTiO_3 , needed to produce 12 kg of titanium.
[Relative atomic masses: A_r : Ti, 48; Fe, 56; O, 16]

mass of titanium-iron oxide = kg [2]

- 4 Fig. 4.1 shows the materials used to make ballpoint pen.

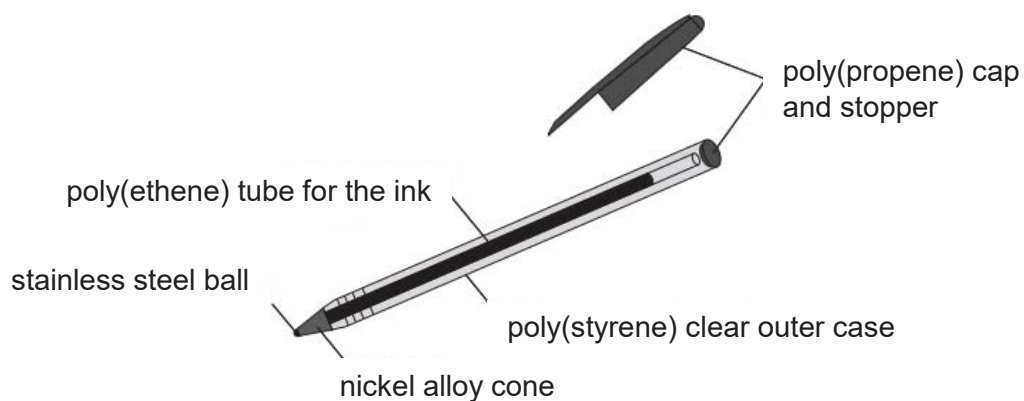


Fig. 4.1

- (a) With reference to the arrangement of atoms, explain why alloys such as steel are used as materials in the pen, instead of pure metals.

.....

.....

.....

.....

[2]

- (b) Give one advantage and one disadvantage of recycling the materials from this ballpoint pen.

.....

.....

.....

.....

[2]

5 (a) Use your knowledge of electronic structures to explain the following statements.

(i) Elements in Group II have similar chemical properties.

.....

(ii) Elements in Group 0 lack chemical reactivity.

.....

[2]

(b) Element **Z** with an atomic number of 85 is a highly unstable radioactive element.

(i) Suggest two ways in which chlorine differs in properties from element **Z**.

.....

.....

.....

.....

[2]

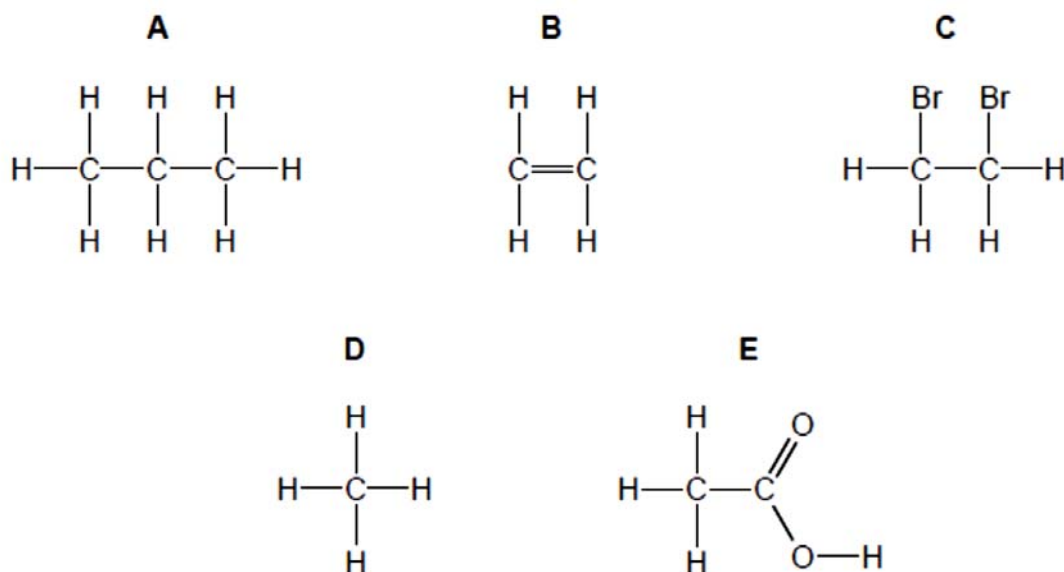
(ii) Excess chlorine is bubbled through a solution of Na**Z**.

Write a chemical equation for the reaction. State symbols are not required.

.....

[1]

6 The structures of five organic compounds are shown below.



(a) Answer each of the following questions using the letters that represent each compound.

(i) Which two compounds are in the same homologous series?

.....

(ii) Which compound is formed when ethanol reacts with atmospheric oxygen?

.....

(iii) Which compound reacts with steam to form ethanol?

.....

[3]

(b) A solution of ethanol can be made by fermentation of glucose.

(i) Draw the structural formula of ethanol.

[1]

(ii) State two conditions required for the fermentation of glucose.

.....

.....

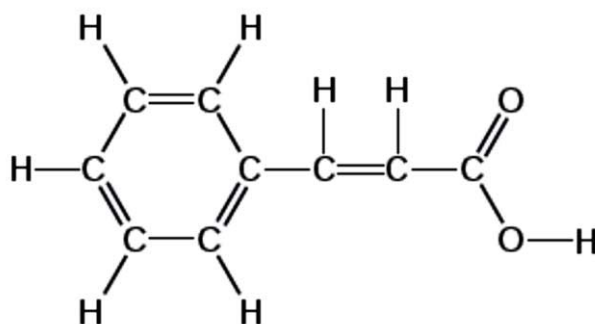
[2]

- (iii) Calculate the relative molecular mass of ethanol and the percentage by mass of carbon in each molecule of ethanol.
[Relative atomic masses: A_r : H, 1; C, 12; O, 16]

[2]

7 Cinnamic acid is found in plants called balsams.

The structure of cinnamic acid is shown below.



(a) Cinnamic acid is an unsaturated compound.

- (i) What is meant by the term *unsaturated*?

..... [1]

- (ii) Describe a chemical test to show that cinnamic acid is unsaturated.

chemical test

.....
.....

result with cinnamic acid

.....
.....

[2]

- (b) Balsam flowers contain a mixture of pigments.

A student uses chromatography to separate the pigments in balsam flowers. He puts the pigment mixture on a sheet of chromatography paper as well as five spots of pure pigments **A**, **B**, **C**, **D** and **E**.

The results are shown as a chromatogram in Fig. 7.1.

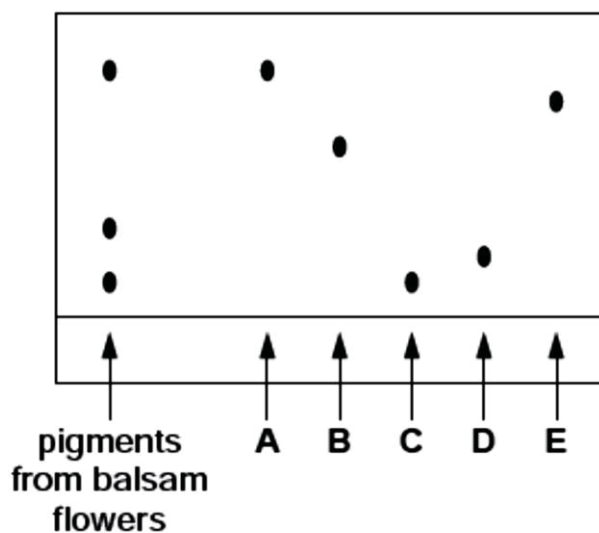


Fig. 7.1

- (i) Which of the pigments are present in balsam flowers?

.....
[1]

- (ii) Draw the apparatus that could be used to produce this chromatogram.

[2]

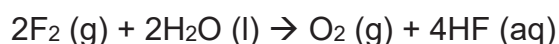
Section B

Answer any **two** questions in this section.

Write your answers in the writing papers provided.

8 Fluorine is the lightest halogen and exists as a highly reactive pale yellow diatomic gas at room temperature and pressure. Fluorine is found in nature in the form of calcium fluoride crystals, called fluorite.

- (a) The following equation describes the reaction between fluorine gas and water.



Given that 48 cm³ of fluorine gas reacts with excess water, calculate the **volume** and **mass** of oxygen gas produced at room temperature and pressure. [2]

- (b) Draw and label the electronic structures of fluorine gas and calcium fluoride.
[Proton numbers: F, 9; Ca, 20] [4]
- (c) Use these structures to explain why, at room temperature and pressure, calcium fluoride is a solid and fluorine is a gas. [4]

9 (a) The reaction of metal **X** with water places it between calcium and iron in this order of reactivity. Explain why **X** would displace copper if added to a solution of copper(II) sulfate. [2]

- (b) Aluminium does not react with cold water. Does this give a true indication of the reactivity of this element? Explain your answer. [2]

(c) Iron is produced in the blast furnace by heating a mixture of iron(III) oxide, coke and limestone with air.

Describe the reactions involved in this extraction.
Include an equation of a redox reaction. [6]

- 10** Dilute hydrochloric acid reacts with calcium carbonate to produce carbon dioxide.
- (a)**
- (i)** With the aid of a diagram, design and describe an experiment in a laboratory to show how the rate of reaction between these two substances depends on the particle size of calcium carbonate. [4]
 - (ii)** Describe the measures you would take to ensure that your experiment is fair. [2]
 - (iii)** State and explain how the rate of reaction between two substances is affected by the particle size of one substance. Use your knowledge of reacting particles in your explanation. [2]
- (b)** Increasing the concentration of acid can change the speed of a reaction. State and explain how it affects the speed of the reaction. Use your knowledge of reacting particles in your explanation. [2]

End of Paper

BLANK PAGE

Geylang Methodist School (Secondary)

Preliminary Examination 2018

Secondary 4E5N Science (Chemistry) Answer SchemePaper 1

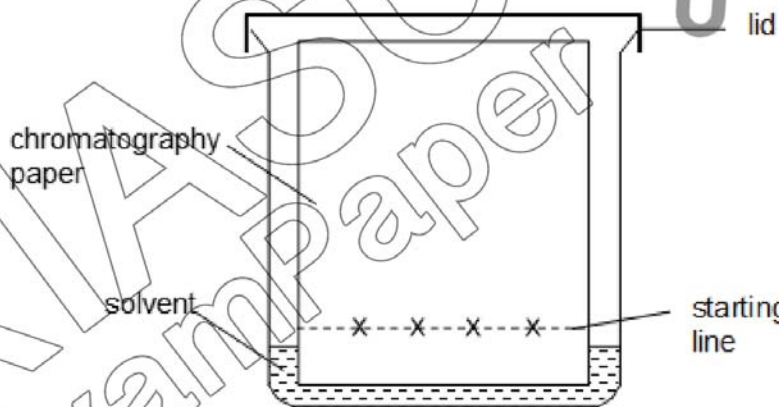
1	2	3	4	5	6	7	8	9	10
C	D	D	A	B	D	B	A	C	C

11	12	13	14	15	16	17	18	19	20
D	B	B	A	D	A	D	B	B	C

Paper 3 Section A

Question			Marking Point	Marks
1	(a)	(i)	Fe	1
		(ii)	Cl	1
		(iii)	Zn	1
		(iv)	H or N	1
		(v)	S	1
	(b)		Position of X: Group 0, 2 nd element (Ne)	1
			Total:	6
2	(a)		A – copper(II) oxide B – oxygen gas C – ammonia gas D – copper(II) hydroxide	4 (1M each)
	(b)	(i)	Any soluble carbonate e.g. sodium carbonate / potassium carbonate	1
		(ii)	$\text{Cu}(\text{NO}_3)_2 (\text{aq}) + \text{Na}_2\text{CO}_3 (\text{aq}) \rightarrow \text{CuCO}_3 (\text{s}) + 2 \text{NaNO}_3 (\text{aq})$ Balanced chemical equation – 1 State symbols – 1	2
		(iii)	Mix the solutions together and stir.	1
			Filter the mixture to obtain copper(II) carbonate as the residue.	1
			Wash the residue with distilled water.	1
	(c)		<u>Add</u> hydrochloric acid to copper(II) carbonate.	1
			Effervescence observed, <u>gas produced forms white precipitate</u> when passed into limewater.	1
			Total:	12

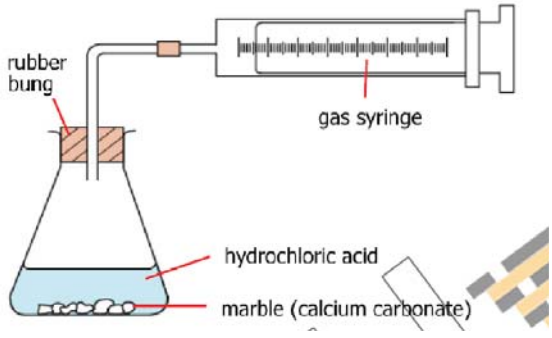
Question		Marking Point	Marks
3	(a)	No. of moles of titanium = $12\,000 / 48 = \underline{250}$ moles No. of moles of $\text{MgCl}_2 = 250 \times 2 = 500$ moles	1
		Mass of $\text{MgCl}_2 = 500 \times (24 + 35.5 \times 2) = 47500 \text{ g} = \underline{47.5} \text{ kg}$	1
	(b)	% mass of Ti in FeTiO_3 $= 48 / (56+48+16 \times 3) \times 100\% = 31.57894 \%$	1
		Mass of FeTiO_3 to produce 12kg of Ti $= 12/31.57894 \times 100 = \underline{38} \text{ kg}$	1
		Total:	4
4	(a)	Alloys are <u>harder</u> than pure metals.	1
		The <u>different sized atoms disrupt the orderly arrangement</u> of atoms, Hence making it <u>difficult</u> for the metal atoms to slide over one another.	1
	(b)	Advantage: <ul style="list-style-type: none"> • Conserves finite resources of crude oil/metal ores. • Reduces use of landfill. • Less problems caused from disposal. • Materials used are non-biodegradable. • Less expensive than producing from raw materials. 	Any 1
		Disadvantage: <ul style="list-style-type: none"> • Difficulty / high cost to separate the materials. • Not all materials can be recycled. 	Any 1
		Total:	4
5	(a)	(i) They all have 2 valence electrons.	1
		(ii) They all have complete/full valence shell.	1
	(b)	(i) <ul style="list-style-type: none"> • Chlorine has lower boiling/melting point than astatine/Z. OR Chlorine is a gas at room temperature but astatine/Z is a solid at room temperature. • Chlorine is greenish yellow in colour but astatine/Z is black in colour. • Chlorine is more reactive than astatine/Z. 	Any 2
		(ii) $\text{Cl}_2 + 2 \text{NaZ} \rightarrow \text{Z}_2 + 2 \text{NaCl}$	2
		Total:	6
6	(a)	(i) A and D	1
		(ii) E	1
		(iii) B	1

Question		Marking Point	Marks
	(b) (i)	$ \begin{array}{c} \text{H} \quad \text{H} \\ \quad \\ \text{H}-\text{C}-\text{C}-\text{O}-\text{H} \\ \quad \\ \text{H} \quad \text{H} \end{array} $	1
	(ii)	37°C, absence of oxygen, presence of yeast	Any 2
	(iii)	Mr of ethanol = $2 \times 12 + 6 + 16 = 46$ (no units)	1
		%mass of carbon = $24/46 \times 100\% = 52.2\%$ (3sf)	1
		Total:	8
7	(a) (i)	Compound consists of at least one C=C bond	1
	(ii)	Add compound to aqueous bromine/ bromine solution/ bromine water.	1
		Reddish brown aqueous bromine decolourises.	1
	(b) (i)	A and C (both must be correct)	1
	(ii)	 <p>Proportional drawing – 1 Appropriate labels – 1</p>	2
		Total:	6

Section B

Question		Marking Point	Marks
8	(a)	Volume of oxygen = $48/2 = 24 \text{ cm}^3$	1
		No. of moles of oxygen = $0.024 / 24 = 0.001$ Mass of oxygen = $0.001 \times 32 = 0.032 \text{ g}$.	1
	(b)	<p>Fluorine gas Correct sharing – 1 Correct number of valence electrons – 1</p> <p>Calcium fluoride Correct calcium ion – 1 Correct fluoride ion – 1</p>	4
	(c)	Fluorine is a covalent molecule. It has <u>weak intermolecular forces of attraction</u>	1
		which requires <u>small amount of energy</u> to overcome/ has <u>low boiling point</u> hence it is a gas at r.t.p.	1
		Calcium fluoride is an ionic compound. It has <u>strong electrostatic forces of attraction between the ions</u>	1
		which requires <u>large amount of energy</u> to overcome/ Has <u>high melting point</u> hence is a solid at room temperature.	1
		Total:	10

Question		Marking Point	Marks
9	(a)	X is more reactive than iron, which is more reactive than copper.	1
		Hence X is more reactive than copper.	1
	(b)	No. Aluminium reacts with oxygen to <u>form a layer of aluminium oxide</u>	1
		which is <u>unreactive</u> and hence <u>prevents the aluminium metal from reacting with water.</u>	1
	(c)	Coke burns in air to form carbon dioxide	1
		Carbon dioxide reacts with more coke to form carbon monoxide.	1
		Carbon monoxide reacts with iron(III) oxide to form iron and carbon dioxide.	1
		Limestone decomposes to form calcium oxide and carbon dioxide.	1
		Calcium oxide reacts with sand (silicon dioxide) to form calcium silicate/molten slag.	1
		Equation of Redox reaction <ul style="list-style-type: none"> • $C + O_2 \rightarrow CO_2$ • $CO_2 + C \rightarrow 2 CO$ • $Fe_2O_3 + 3 CO \rightarrow 2 Fe + 3 CO_2$ 	Any 1
		Total:	10

Question	Marking Point	Marks
10 (a) (i)	 <p>Weigh 2.0 g of calcium carbonate lumps and place in a conical flask. Add 50cm³ of 1mol/dm³ dilute hydrochloric acid into the flask. Record the time taken for effervescence to stop / time taken to collect 10 cm³ of gas Repeat experiment with powdered calcium carbonate and compare the time taken for both experiments.</p> <p>Marking points (1M each):</p> <ul style="list-style-type: none"> • Appropriate diagram with suitable labels • Use of appropriate mass of calcium carbonate and volume of acid • Use of different particle size of calcium carbonate (lumps vs powdered or large lumps vs small lumps) in two experiments. • Observation or change that is measured to compare the rate of reaction (time taken for effervescence to stop / time taken to collect fixed volume of gas) 	4
	<p>(ii)</p> <ul style="list-style-type: none"> • Concentration of dilute hydrochloric acid used is the same. • Mass of calcium carbonate used is the same. • Temperature of both experiments is the same. <p><i>Reject:</i> Equal volume of dilute hydrochloric acid Shake the acid to ensure reaction is complete Repeat experiment and obtain average of results.</p>	Any 2
	<p>(iii) The <u>smaller the particle size, the larger the total surface area</u> for particles to collide,</p>	1
	<p>resulting in <u>increased number of effective collisions</u> and hence <u>higher speed of reaction</u>. (opposite is true)</p>	1
(b)	<p><u>The higher the concentration of acid, the higher the speed of reaction</u></p>	1
	<p>The more concentrated the acid, the more <u>acid particles per unit volume</u>, resulting in increased number of effective collisions</p>	1
Total:		10

